







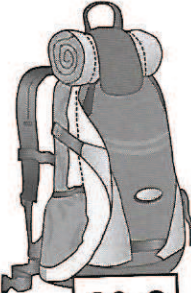































Compétence : Rendre la monnaie sur une somme en euros.

Prénom Date

1 Entoure les pièces et les billets que le commerçant rend à Tom.

Tom achète	Il donne	Le commerçant lui rend
 <div style="border: 1px solid black; padding: 2px; display: inline-block;">16 €</div>		     
 <div style="border: 1px solid black; padding: 2px; display: inline-block;">38 €</div>		     
 <div style="border: 1px solid black; padding: 2px; display: inline-block;">125 €</div>	 	      
 <div style="border: 1px solid black; padding: 2px; display: inline-block;">215 €</div>	  	       

Compétence : Rendre la monnaie sur une somme en euros.

Correction

Prénom Date




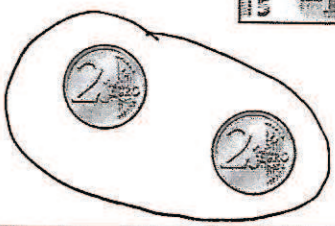

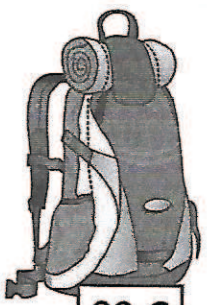

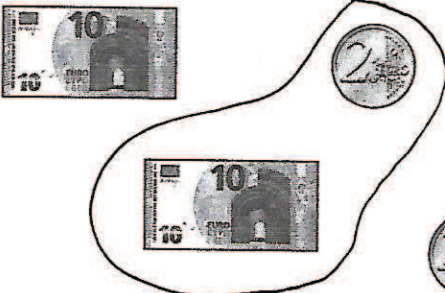





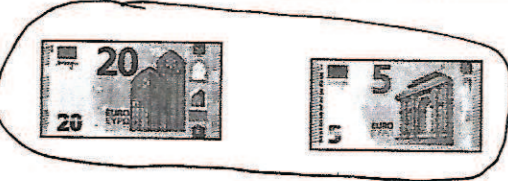












1 Entoure les pièces et les billets que le commerçant rend à Tom.

$$\begin{array}{r} 20 \\ - 16 \\ \hline 04 \end{array}$$

$$\begin{array}{r} 50 \\ - 38 \\ \hline 12 \end{array}$$

$$\begin{array}{r} 150 \\ - 125 \\ \hline 025 \end{array}$$

$$\begin{array}{r} 300 \\ - 215 \\ \hline 085 \end{array}$$

Tom achète	Il donne	Le commerçant lui rend
 <div style="border: 1px solid black; padding: 2px; display: inline-block;">16 €</div>		  
 <div style="border: 1px solid black; padding: 2px; display: inline-block;">38 €</div>		  
 <div style="border: 1px solid black; padding: 2px; display: inline-block;">125 €</div>	 	    
 <div style="border: 1px solid black; padding: 2px; display: inline-block;">215 €</div>		     

Il faut calculer la différence.