




Écris le nombre de cubes.



Il y a millier, centaines, dizaines et unités.

Il y a millier, centaine, dizaines et unités.




Il y a millier, centaines, dizaine et unité.

Il y a millier, centaine, dizaine et unités.

Entoure tout ce qui correspond au nombre de cubes.

- 12c 5d 1u
- 1521
- 125d 1u
- 2m 151 u
- 1m 2c 5d 1u
- 1251u
- 10c + 251u
- 1251



Recompose chaque nombre.

- $1000 + 500 + 20 + 8 = 1528$
- $1000 + 800 + 4 = \dots\dots\dots$
- $600 + 80 + 2 + 1000 = \dots\dots\dots$
- $70 + 1000 + 9 = \dots\dots\dots$

Recompose chaque nombre.

- $(1 \times 1000) + (3 \times 100) + (5 \times 10) = 1350$
- $(1 \times 1000) + (4 \times 10) = \dots\dots\dots$
- $(1 \times 1000) + (8 \times 1) = \dots\dots\dots$
- $(9 \times 10) + (1 \times 1000) + (4 \times 100) = \dots\dots\dots$