



Énigmes

lundi

mardi

mercredi

jeudi

vendredi

samedi

dimanche



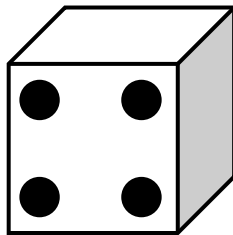
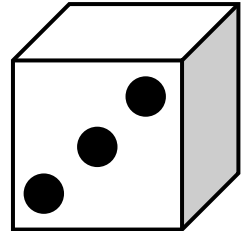
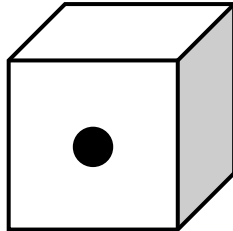



/

/



Kity a lancé 3 dés, elle a obtenu 8 points. Choisis les 3 bons dés.



Énigmes fiche 6 A CP

l'potâme.



Énigmes

lundi

mardi

mercredi

jeudi

vendredi

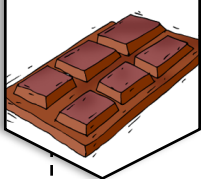
samedi

dimanche





/

/



Jordi a croqué la tablette de chocolat. Combien y avait-il de carrés dans cette tablette ?



Énigmes fiche 6 B CP

l'potâme.




Énigmes

lundi mardi mercredi jeudi vendredi samedi dimanche

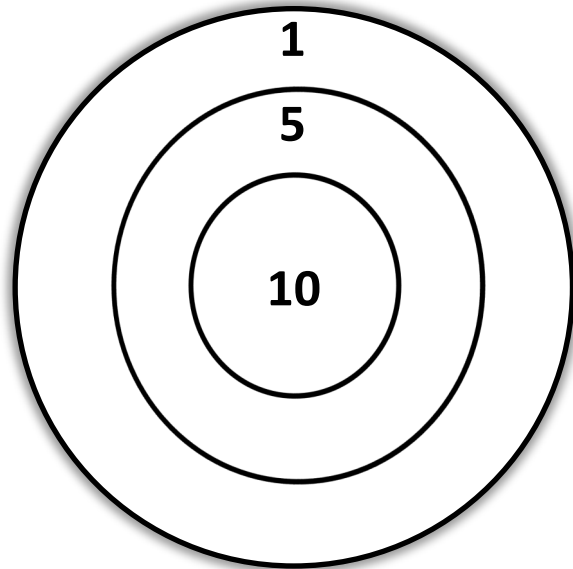



/

/



Aldo a lancé 5 fléchettes et a obtenu 31 points.
Dessine les fléchettes à la bonne place dans la cible.



Énigmes fiche 7 A CP

l'potâme.




Énigmes

lundi mardi mercredi jeudi vendredi samedi dimanche

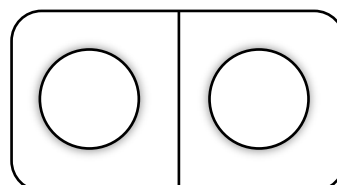
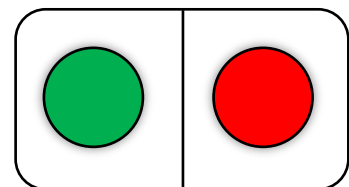
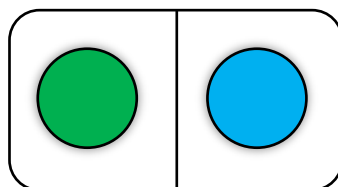
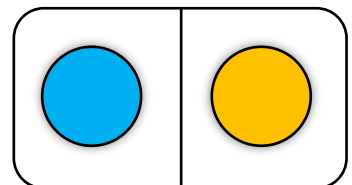
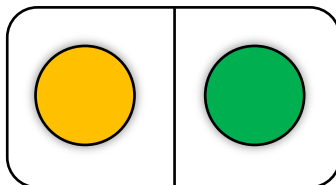
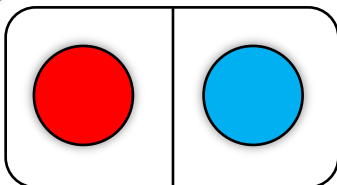


/

/



Lucien a perdu le dernier domino, colorie ce domino qui est différent de tous les autres et a 2 couleurs.



Énigmes fiche 7 B CP

l'potâme.



Énigmes

lundi mardi mercredi jeudi vendredi samedi dimanche

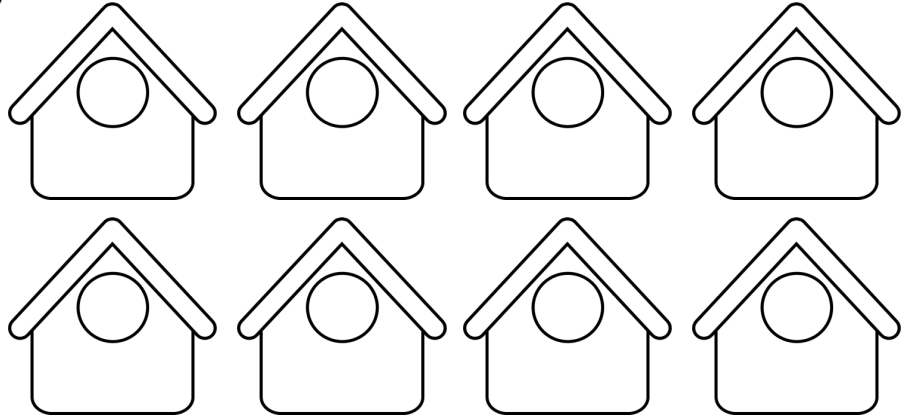


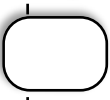


/

/



Bazil veut construire le plus possible de nichoirs différents. Colorie les nichoirs de Bazil.



Énigmes fiche 8 A CP

l'potâme.



Énigmes

lundi mardi mercredi jeudi vendredi samedi dimanche

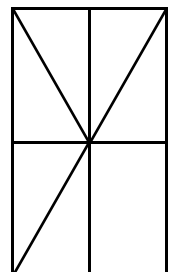
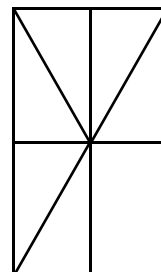
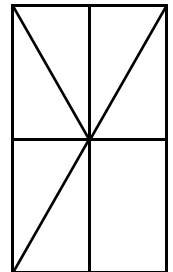
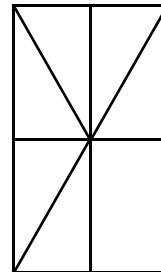
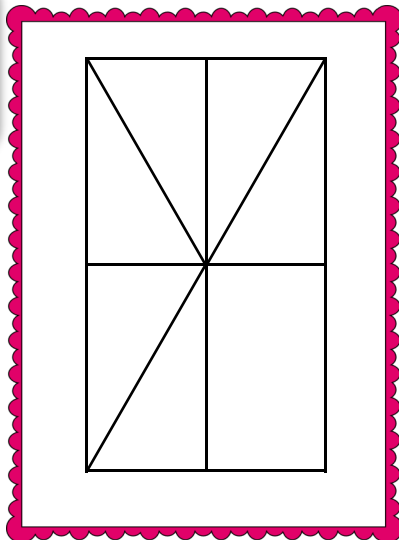




/

/



Combien de triangles Cyrano a-t-il dessiné sur son ardoise ? Pour t'aider utilise les petits dessins.



Énigmes fiche 8 B CP

l'potâme.