









1 Écris dans le nuage le nombre d'étoiles cachées, complète l'opération :

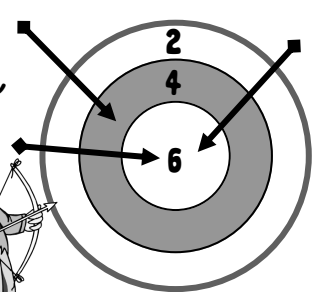
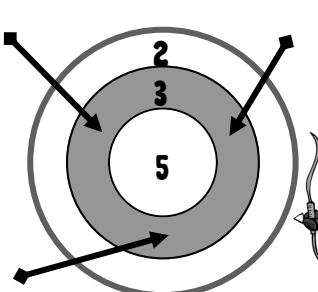
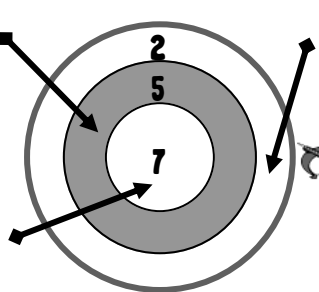
<p>$3+2=5$</p>  <p>7</p> <p>$3 + \underline{\quad} = 7$</p>	 <p>8</p> <p>$6 + \underline{\quad} = 8$</p>	 <p>9</p> <p>$3 + \underline{\quad} = 9$</p>
 <p>6</p> <p>$2 + \underline{\quad} = 6$</p>	 <p>9</p> <p>$6 + \underline{\quad} = 9$</p>	 <p>7</p> <p>$4 + \underline{\quad} = 7$</p>

2 Complète pour obtenir 10 . 

$3+2=5$	$0 + \underline{\quad}$	$3 + \underline{\quad}$	$4 + \underline{\quad}$	$9 + \underline{\quad}$
10	$10 + \underline{\quad}$	$7 + \underline{\quad}$	$6 + \underline{\quad}$	
	$8 + \underline{\quad}$	$2 + \underline{\quad}$	$1 + \underline{\quad}$	$5 + \underline{\quad}$

3 Calcule le nombre de points de chaque personnage et indique qui a gagné :


$3+2=5$ C'est qui a gagné.

<p>le coq</p>  <p>$6 + 4 + 2 = \underline{\quad}$</p>	<p>l'âne</p>  <p>$3 + \underline{\quad} + \underline{\quad} = \underline{\quad}$</p>	<p>le rat</p>  <p>$\underline{\quad} + \underline{\quad} + \underline{\quad} = \underline{\quad}$</p>
---	--	---

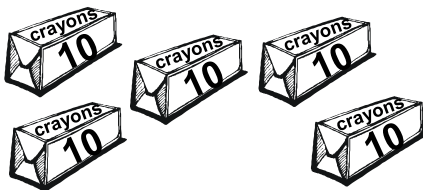


1 Calcule le nombre des Crayons :


3+2=5



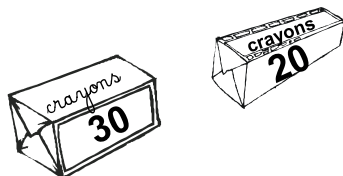
10 + 10 + 10 = 30




_____ + _____ + _____ + _____ + _____ = _____



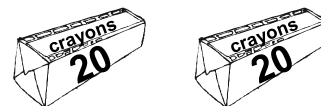
_____ = _____



30 + 20 = 50



_____ = _____



_____ = _____

2 Calcule :

3+2=5

4 + 1 = _____

2 + 2 = _____

3 + 4 = _____

6 + 1 = _____

40 + 10 = _____

20 + 20 = _____

30 + 40 = _____

60 + 10 = _____

3 Colorie uniquement les pommes du 2 :

3+2=5

1	2	3	4	5	6	7	8	9	10	11	12
---	---	---	---	---	---	---	---	---	----	----	----

2

4 + = 6

3 + = 5

11 - = 9

8 - = 4

8 + = 10

6 + = 9

6 - = 3

7 - = 5

6 + = 10

5 + = 7

8 - = 6

4 - = 4

6 + = 8

4 + = 5

4 - = 2

9 - = 7

2 + = 4

7 + = 8

3 - = 0

12 - = 10