




**1** • Observe.



• Calcule.

$4 + 3 = \dots\dots\dots$

$300 + 2 = \dots\dots\dots$

$50 + 4 = \dots\dots\dots$

$40 + 30 = \dots\dots\dots$

$300 + 20 = \dots\dots\dots$

$2 + 30 + 200 = \dots\dots\dots$

$400 + 300 = \dots\dots\dots$

$300 + 200 = \dots\dots\dots$

$50 + 200 + 3 = \dots\dots\dots$

**2** Colorie : même nombre, même couleur.

\*

254	$5 + 20 + 400$	5c 4d 2u
4c 2d 5u	$200 + 50 + 4$	
542	2c 5d 4u	$200 + 54$
$400 + 25$	$500 + 42$	425

**3** Utilise deux de ces nombres pour compléter les opérations.

\*

2	40	100
+ ..... = 102		
- ..... = 98		
x ..... = 80		

**4** Calcule.

* $25 + 3 = \dots\dots\dots$	$72 + 15 = \dots\dots\dots$
$31 + 9 = \dots\dots\dots$	$33 + 22 = \dots\dots\dots$
$67 + 6 = \dots\dots\dots$	$28 + 14 = \dots\dots\dots$

**5** Calcule.

** $37 - 5 = \dots\dots\dots$	$41 - 4 = \dots\dots\dots$
$29 - 6 = \dots\dots\dots$	$35 - 7 = \dots\dots\dots$
$64 - 12 = \dots\dots\dots$	$70 - 5 = \dots\dots\dots$

**6** Calcule.

** $200 + 30 + 40 + 6 + 100 = \dots\dots\dots$
$80 + 500 + 3 + 100 + 4 = \dots\dots\dots$
$50 + 8 + 200 + 2 + 50 = \dots\dots\dots$

**7** Complète les additions à trou.

** <table border="1" style="display: inline-table; vertical-align: middle;"> <tr><td></td><td></td><td></td></tr> <tr><td></td><td>4</td><td>3</td></tr> <tr><td></td><td></td><td></td></tr> <tr><td>+</td><td>.</td><td>.</td></tr> <tr><td colspan="3"><hr/></td></tr> <tr><td></td><td>7</td><td>8</td></tr> </table>					4	3				+	.	.	<hr/>				7	8	<table border="1" style="display: inline-table; vertical-align: middle;"> <tr><td></td><td></td><td></td></tr> <tr><td></td><td>5</td><td>8</td></tr> <tr><td></td><td></td><td></td></tr> <tr><td>+</td><td>.</td><td>.</td></tr> <tr><td colspan="3"><hr/></td></tr> <tr><td></td><td>8</td><td>2</td></tr> </table>					5	8				+	.	.	<hr/>				8	2
	4	3																																			
+	.	.																																			
<hr/>																																					
	7	8																																			
	5	8																																			
+	.	.																																			
<hr/>																																					
	8	2																																			



