





1 Combien y a-t-il de ballons ? N'oublie pas de compter les ballons des robots !



Il y a  ballons.

2 Complète avec < ou >.



47 \_\_\_ 67


56 \_\_\_ 46

59 \_\_\_ 69

68 \_\_\_ 59

62 \_\_\_ 64

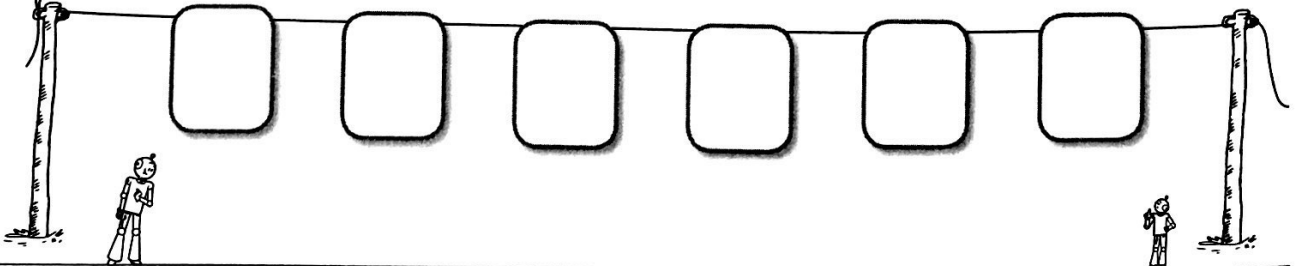
65 \_\_\_ 66



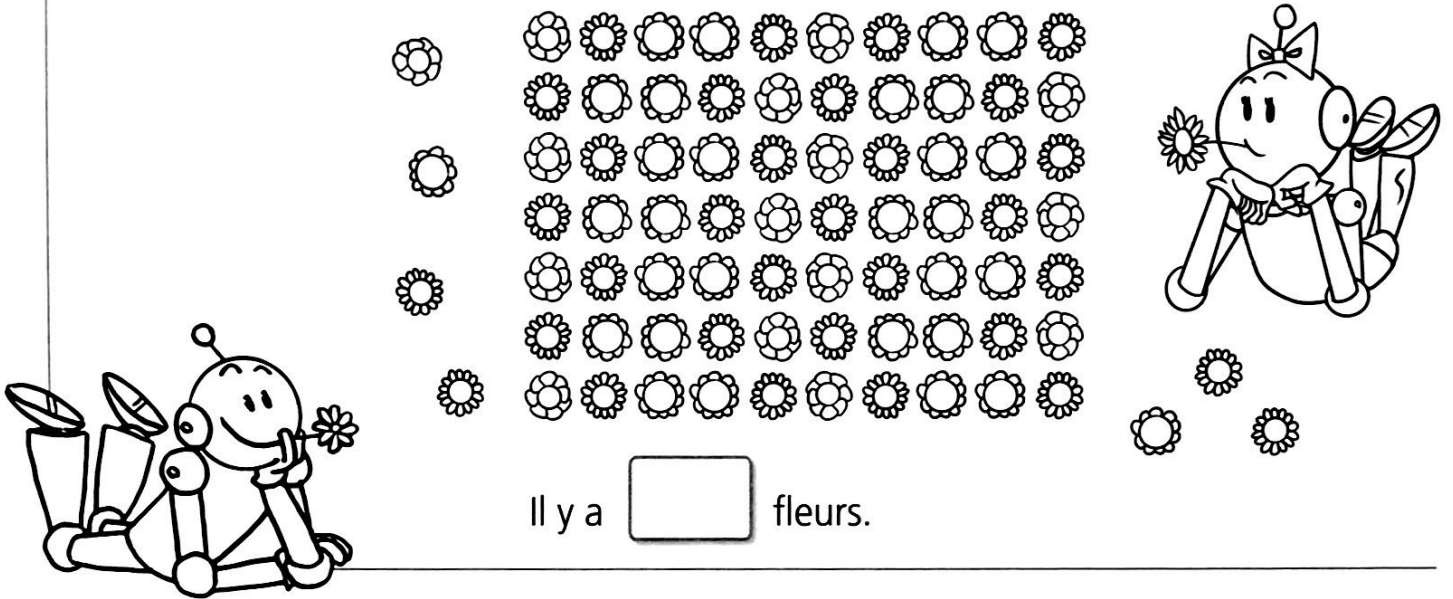
3 Range les nombres du plus grand au plus petit.



65 48 57 69 49 59




1 Combien y a-t-il de fleurs ? N'oublie pas de compter les fleurs des robots !



Il y a  fleurs.

2 Complète avec < ou >.



78 \_\_\_ 79


76 \_\_\_ 75

69 \_\_\_ 79

72 \_\_\_ 76

73 \_\_\_ 63

75 \_\_\_ 71



3 Colorie le bon nombre de fleurs.

