









1 Calcule.



$10 + 10 = 20$



$10 + 10 + 10 = \underline{\quad}$




$10 + 10 + 10 + 10 + 10 = \underline{\quad}$

2 Calcule.


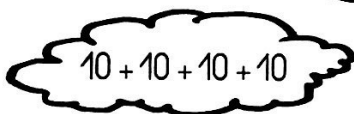




$10 + 10 + 10 + 10 = \underline{\quad}$

$10 + 10 + 10 + 10 + 10 + 10 = \underline{\quad}$

$10 + 10 + 10 + 10 + 10 + 10 + 10 + 10 = \underline{\quad}$



3 Colorie les nuages selon le code couleur.




20 jaune

30 vert

40 orange

50 bleu

1 Écris l'opération et calcule.



$$10 + 10 + 10 = 30$$

$$\underline{\quad} + \underline{\quad} + \underline{\quad} + \underline{\quad} = \underline{\quad}$$

$$\underline{\quad} + \underline{\quad} + \underline{\quad} + \underline{\quad} + \underline{\quad} = \underline{\quad}$$

2 Calcule.

$$10 + 10 + 10 + 10 + 10 + 10 + 10 = \underline{\quad}$$

$$10 + 10 + 10 + 10 + 10 = \underline{\quad}$$

$$10 + 10 + 10 + 10 + 10 + 10 + 10 + 10 + 10 = \underline{\quad}$$



3 Colorie les sacs selon le code couleur.

- 40 orange
- 50 bleu
- 60 jaune
- 70 vert
- 80 rose