


1 Calcule.



$$30 + 20 = 50$$



$$10 + 10 = \underline{\quad}$$

$$40 + 20 = \underline{\quad}$$






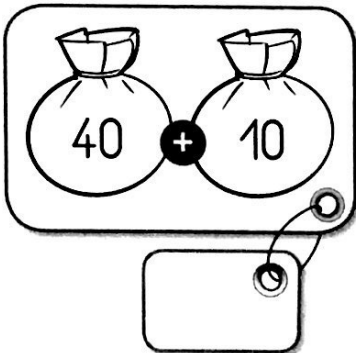
$$20 + 10 = \underline{\quad}$$

$$50 + 20 = \underline{\quad}$$

$$30 + 10 = \underline{\quad}$$

$$60 + 10 = \underline{\quad}$$

2 Calcule.




3 Calcule.

$$10 + 10 = \underline{\quad}$$


$$40 + 50 = \underline{\quad}$$

$$50 + 30 = \underline{\quad}$$


$$10 + 20 = \underline{\quad}$$




1 Calcule.



$$10 + 10 + 3 = 23$$



$$10 + 10 + 10 + 4 = \underline{\quad}$$




$$10 + 10 + 10 + 10 + 8 = \underline{\quad}$$

2 Calcule.

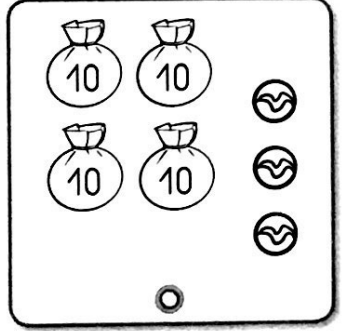


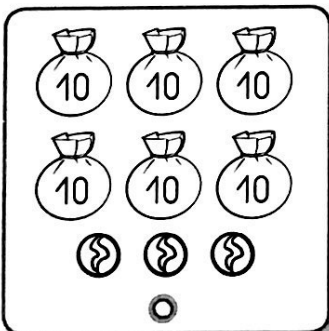
$$10 + 10 + 10 + 10 + 1 = \underline{\quad}$$

$$10 + 10 + 10 + 10 + 10 + 10 + 9 = \underline{\quad}$$

$$10 + 10 + 10 + 10 + 10 + 3 = \underline{\quad}$$



3 Relie chaque étiquette à l'ensemble de billes correspondant.



36

63

43

54