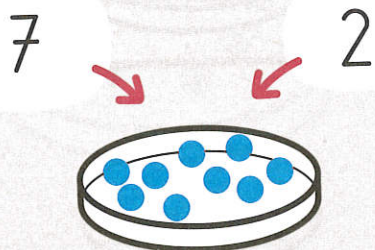


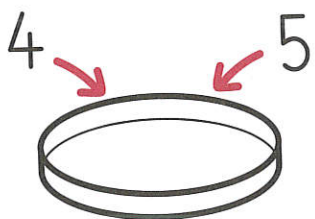
10 L'addition, le symbole +

Quand je calcule avec le signe +, je fais une addition.

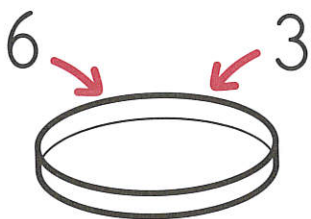


$$\boxed{7} + \boxed{2} = \boxed{9}$$

Dessine les billes dans les boîtes vides. Complète les additions.



$$\boxed{} + \boxed{} = \boxed{}$$

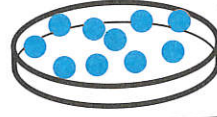
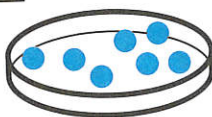
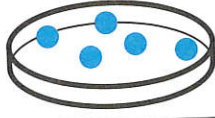
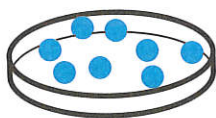


$$\boxed{} + \boxed{} = \boxed{}$$

Colorie la boîte qui correspond à l'addition.

2

$$3 + 4$$



$$4 + 5 + 2$$

