


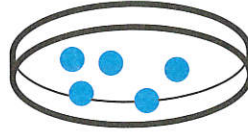
				.	..	9
--	--	--	--	---	----	---



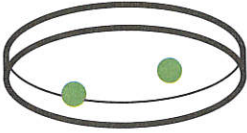
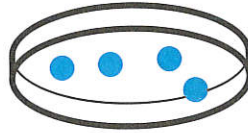
9



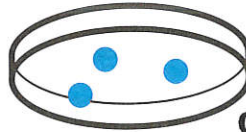
3 ↓



2 ↓



1 ↓

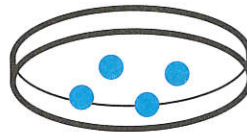


2

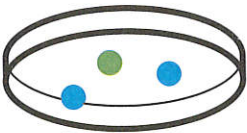
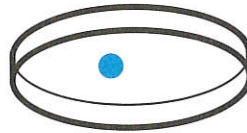
Combien reste-t-il de jetons dans la boîte? Dessine-les.





2 ↑



3 ↑



1 ↑



1

Combien y a-t-il de jetons dans la boîte? Dessine-les.