


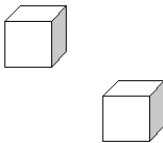
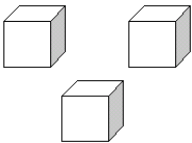
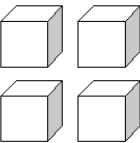
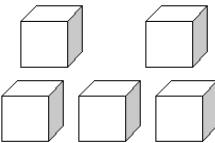
Prénom : .....

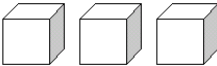
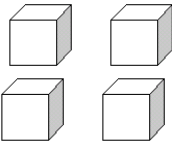
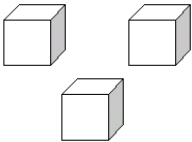
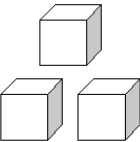
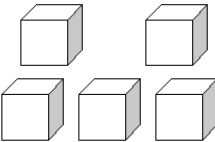
Date : .....

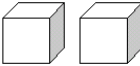
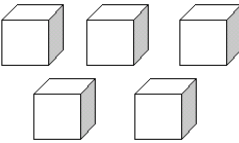
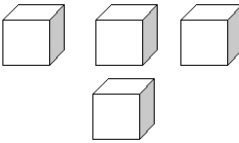

**COMPTER**



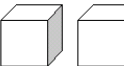

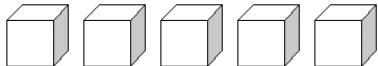
# Je compte jusqu'à... 5 (02)

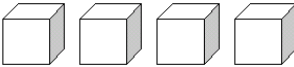
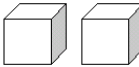
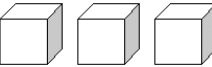

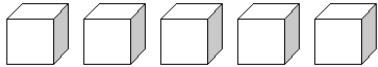
• **Combien y a-t-il de cubes ?**


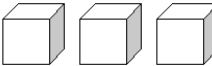
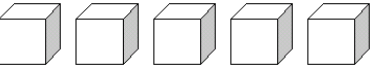
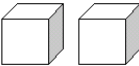
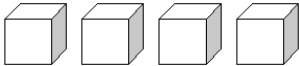
 1 .....	 .....	 .....	 .....	 .....
---	--	--	--	--

 .....	 .....	 .....	 .....	 .....
--	--	--	--	--

 .....	 .....	 .....	 .....	 .....
--	---	---	--	-----------

0	 .....	 .....	 .....	 .....	 .....
---	--	--	--	---	--

 .....	 .....	 .....	 .....	 .....	 .....
--	--	--	--	-----------	--

 .....	 .....	 .....	 .....	 .....	 .....
--	--	--	-----------	--	--

• **Dessine le nombre de cercles :**

3 ○ ⇒ ○ ○ ○	1 ○ ⇒
2 ○ ⇒	4 ○ ⇒
5 ○ ⇒	0 ○ ⇒