

Lecture de l'heure

Exercice 1





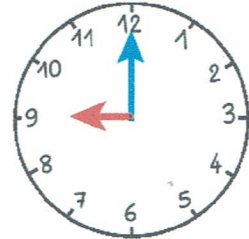
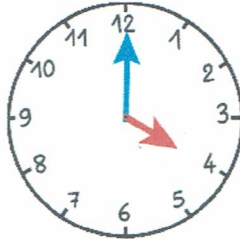
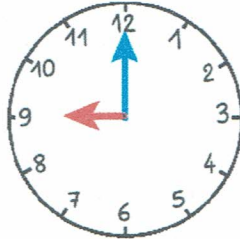
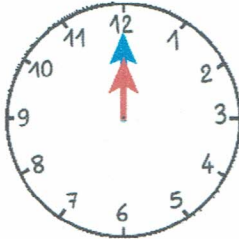
Relie chaque horloge à l'étiquette et à l'activité de Tom correspondantes.

Il est 9 heures.

Il est 12 heures.

Il est 9 heures.

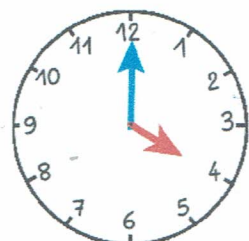
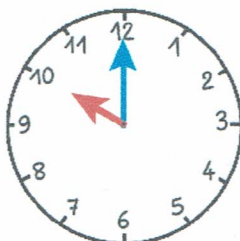
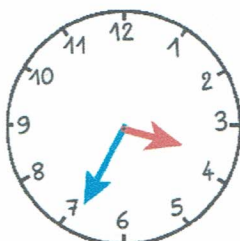
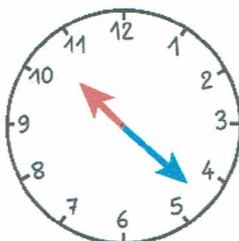
Il est 4 heures.



Exercice 2



Relie chaque horloge à l'étiquette correspondante.



Il est entre 3 heures et 4 heures.

Il est 4 heures.

Il est 10 heures.

Il est entre 10 heures et 11 heures.