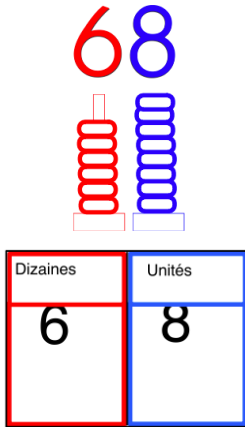
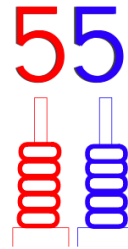


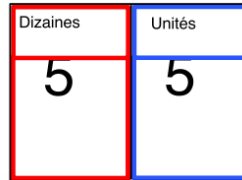
Exercice 1 :



$$68 = 60 + 8$$



$$55 = 50 + 5$$

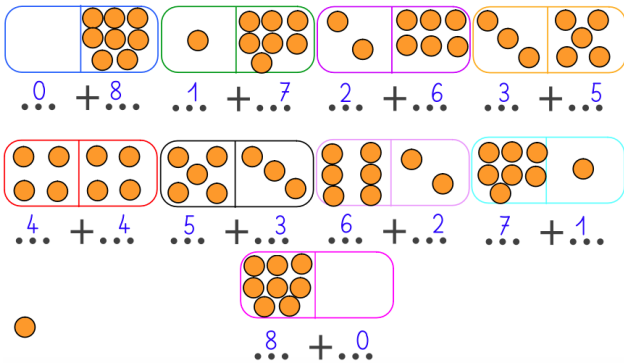


Exercice 2 :

Décompose



8



Exercice 3 :



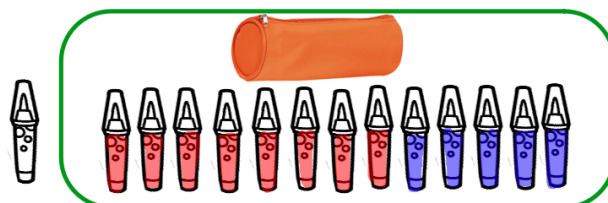
- 0 + 8
- 1 + 7
- 2 + 6
- 3 + 5
- 4 + 4
- 5 + 3
- 6 + 2
- 7 + 1
- 8 + 0

Exercice 4 :



Exercice 5 :

Dans une trousse il y a 13 feutres. 8 sont rouges, les autres sont bleus.
Combien y-a-t-il de feutres bleus?



$$8 + 5 = 13 \text{ ou } 13 - 8 = 5$$

Il y a 5 feutres bleus.