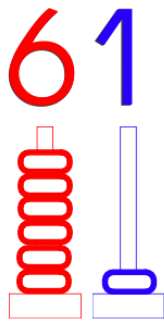
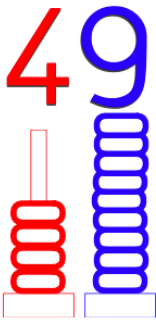


**Exercice 1 :**



Dizaines	Unités
4	9

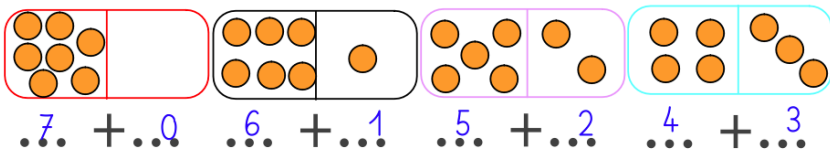
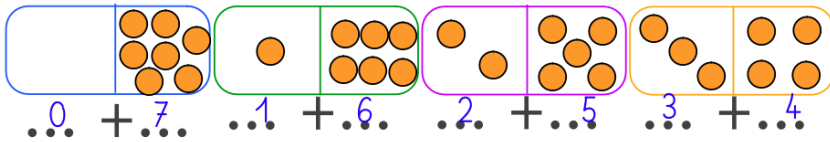
$$49 = 40 + 9$$

Dizaines	Unités
6	1

$$61 = 60 + 1$$

**Exercice 2 :**

Décompose



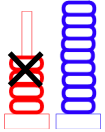
**Exercice 3 :**



0 + 7
1 + 6
2 + 5
3 + 4
4 + 3
5 + 2
6 + 1
7 + 0

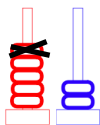
**Exercice 4 :**

$$49 - 20$$



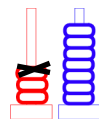
$$49 - 20 = 29$$

$$52 - 10$$



$$52 - 10 = 42$$

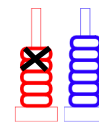
$$37 - 10$$



$$37 - 10 = 27$$




$$56 - 20$$



$$56 - 20 = 36$$

**Exercice 5 :**

Anna a 4 paquets de gâteaux. Dans chaque paquet il y a 3 gâteaux.  
Combien Anna a-t-elle de gâteaux en tout ?



$$3 + 3 + 3 + 3 = 12$$

En tout, Anna a **12** gâteaux.