



Solution défi n°1

Problème n°1  
Les carrés


On compte 10 carrés



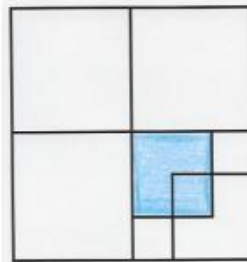
1 carré



4 carrés



3 carrés



1 carré



1 carré