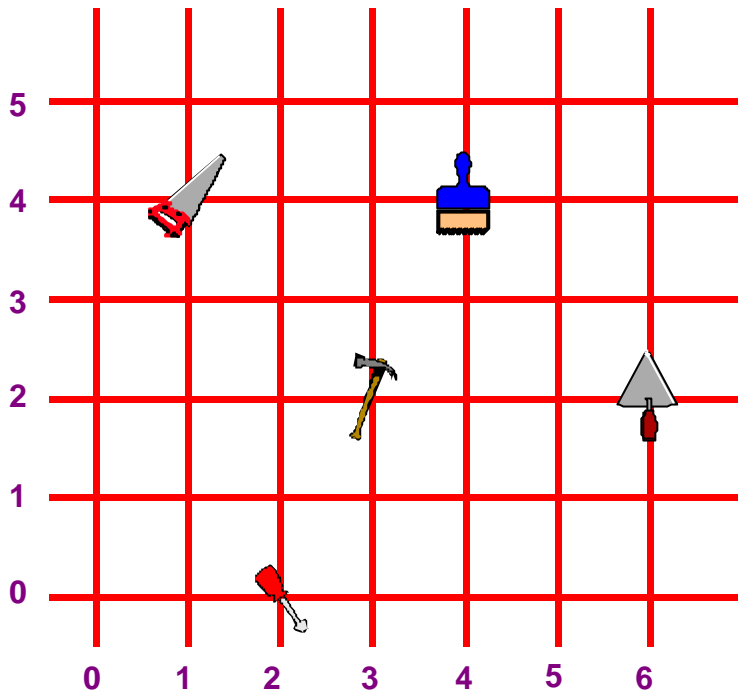







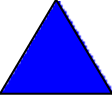




## REPÉRAGE DE NŒUDS

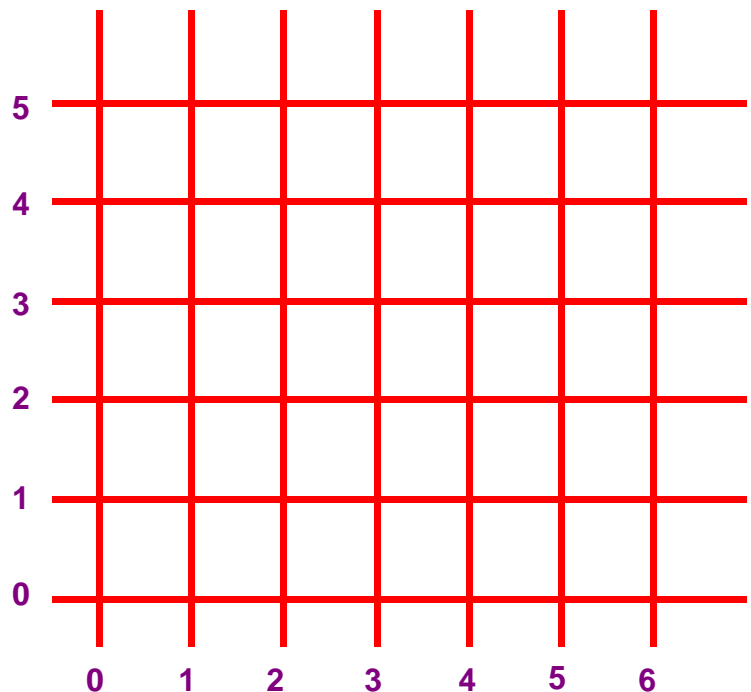
**1) Complète le tableau en indiquant la position des objets dans le quadrillage.**



	scie	(....., .....)
	pinceau	(....., .....)
	truelle	(....., .....)
	tournevis	(....., .....)
	marteau	(....., .....)

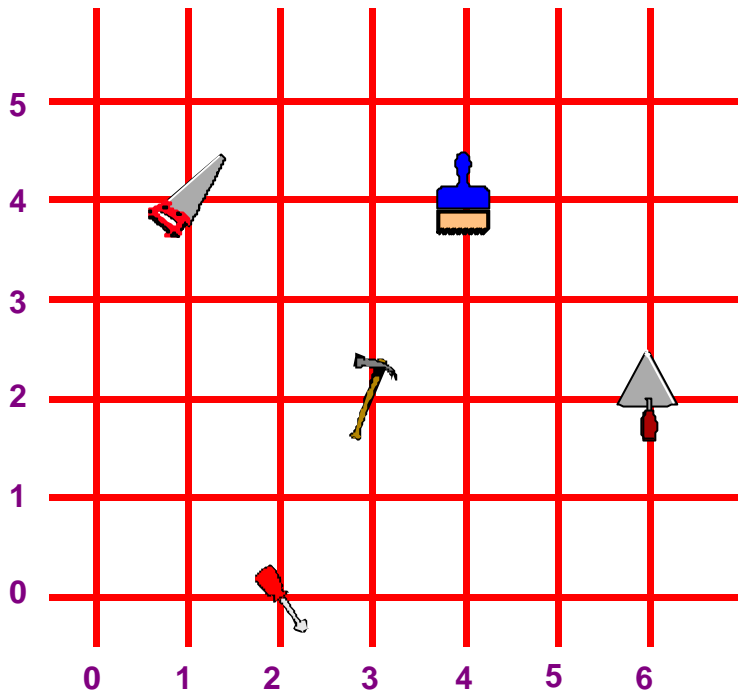
**2) Dessine dans le quadrillage les formes dont la position est indiquée dans le tableau.**






	( 3 , 4 )
	( 1 , 5 )
	( 6 , 0 )
	( 5 , 4 )
	( 6 , 2 )



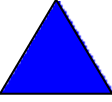




**REPÉRAGE DE NŒUDS**  
**SOLUTION**

**1) Complète le tableau en indiquant la position des objets dans le quadrillage.**



	scie	( 1 , 4 )
	pinceau	( 4 , 4 )
	truelle	( 6 , 2 )
	tournevis	( 2 , 0 )
	marteau	( 3 , 2 )

**2) Dessine dans le quadrillage les formes dont la position est indiquée dans le tableau .**

	( 3 , 4 )
	( 1 , 5 )
	( 6 , 0 )
	( 5 , 4 )
	( 6 , 2 )

