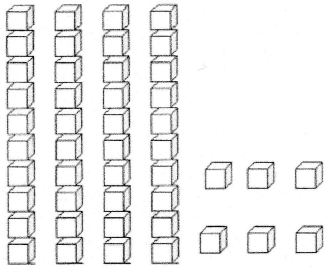


La famille des 40

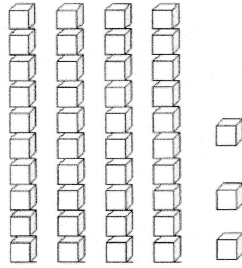
1. Dictée de nombres. (voir en bas de la fiche les nombres à dicter)

16	24	32	20	13	39	28	11	15	40
----	----	----	----	----	----	----	----	----	----

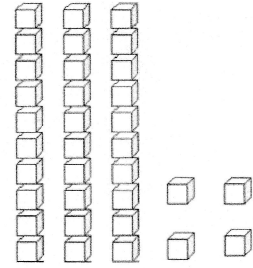
1. Ecris le nombre représenté.



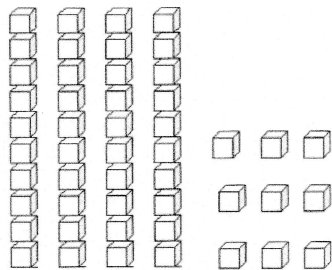
46



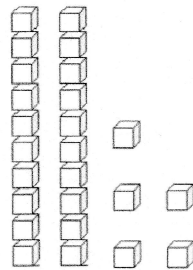
43



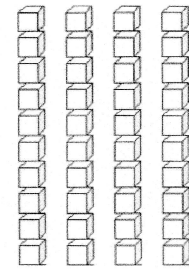
34



49



25



40

5. Complète les bandes numériques.

37	.3.8.	39	.4.0.	4.1.	4.2	4.3.	.4.4.
----	-------	----	-------	------	-----	------	-------

41	.4.2.	43	.4.4.	.4.5.	.4.6.	.4.7	.4.8.
----	-------	----	-------	-------	-------	------	-------

16 - 24 - 32 - 20 - 13 - 39 - 28 - 11 - 15 - 40