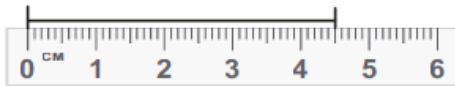




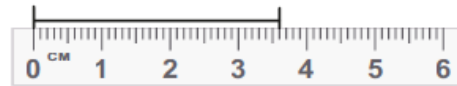
Mon segment mesure 6 cm 5 mm.



1 Donne la mesure de ces segments d'après les règles dessinées.



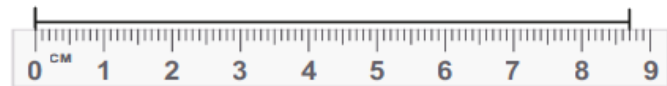
4 cm 5 mm



3 cm 6 mm

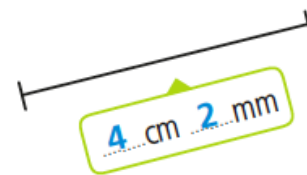

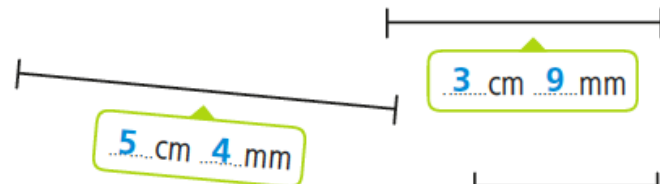
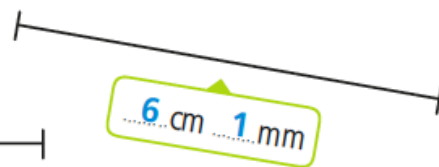


2 cm 3 mm



8 cm 7 mm

2 Mesure les segments.



3 Trace les segments : [AB] : 2 cm 5 mm    [CD] : 8 cm 3 mm    [EF] : 3 cm 7 mm    [GH] : 4 cm 8 mm

