



Mon segment mesure 6 cm 5 mm.



1 Donne la mesure de ces segments d'après les règles dessinées.



.....cmmm



.....cmmm



.....cmmm




.....cmmm

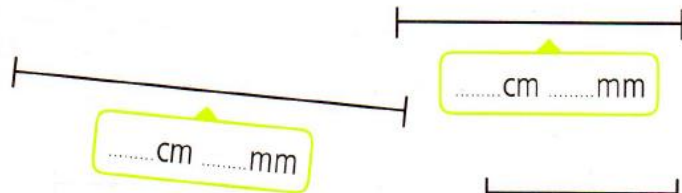
2 Mesure les segments.




.....cmmm



.....cmmm



.....cmmm



.....cmmm



.....cmmm



.....cmmm



3 Trace les segments : [AB] : 2 cm 5 mm [CD] : 8 cm 3 mm [EF] : 3 cm 7 mm [GH] : 4 cm 8 mm

