





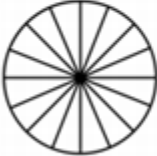
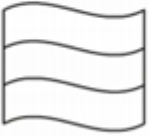

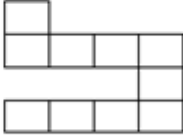




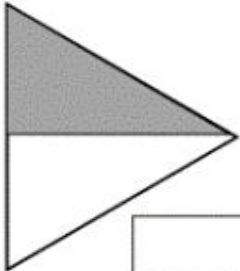


1. Reproduis les partages et colorie la fraction demandée.

					
$\frac{3}{8}$	$\frac{2}{5}$	$\frac{4}{9}$	$\frac{2}{3}$	$\frac{8}{9}$	$\frac{1}{4}$
					
$\frac{11}{16}$	$\frac{3}{3}$	$\frac{4}{6}$	$\frac{7}{10}$	$\frac{1}{8}$	$\frac{2}{6}$

2. Indique la fraction correspondant à la partie grisée.

	<input type="text"/>		<input type="text"/>		<input type="text"/>
<input type="text"/>		<input type="text"/>		<input type="text"/>	