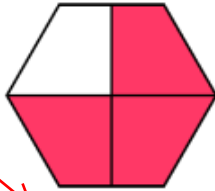


② Est-il possible d'écrire la partie colorée sous forme d'une fraction ?

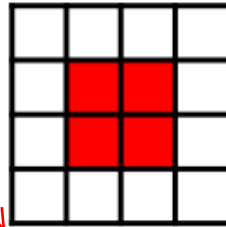
Il faut que les parts soient égales.



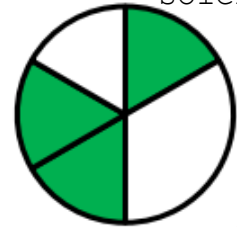
OUI NON



OUI NON



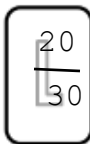
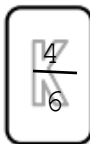
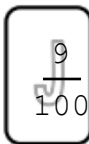
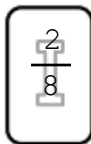
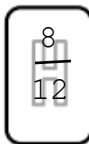
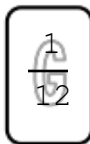
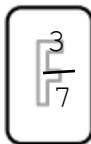
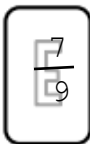
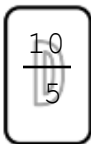
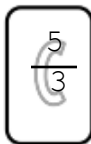
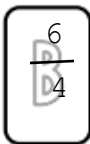
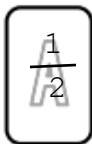
OUI NON



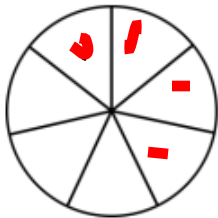
OUI NON

③ Ecris en chiffres.

- | | | | |
|---------------|--------------------|-------------------|---------------------|
| a) un demi | d) dix cinquièmes | g) un dixième | j) neuf centièmes |
| b) six quarts | e) sept neuvièmes | h) huit douzièmes | k) quatre sixièmes |
| c) cinq tiers | f) trois septièmes | i) deux huitièmes | l) vingt trentièmes |



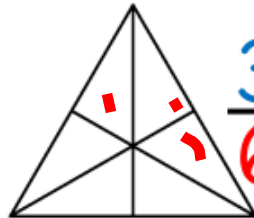
④ Colorie pour obtenir la fraction demandée.



$\frac{4}{7}$



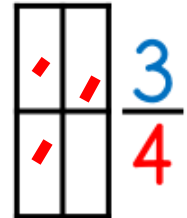
$\frac{2}{3}$



$\frac{3}{6}$



$\frac{1}{5}$



$\frac{3}{4}$