
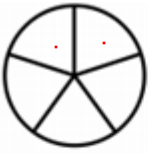




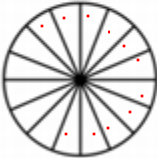
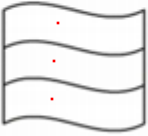
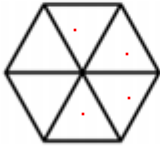

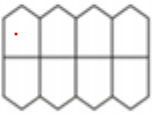
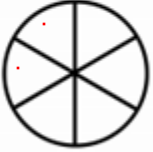
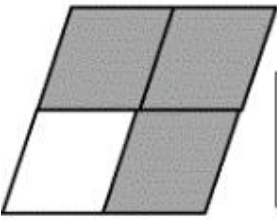

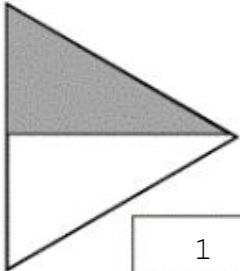


1. Reproduis les partages et colorie la fraction demandée.

| | | | | | |
|---|---|---|--|---|---|
|  |  |  |  |  |  |
| $\frac{3}{8}$ | $\frac{2}{5}$ | $\frac{4}{9}$ | $\frac{2}{3}$ | $\frac{8}{9}$ | $\frac{1}{4}$ |
|  |  |  |  |  |  |
| $\frac{11}{16}$ | $\frac{3}{3}$ | $\frac{4}{6}$ | $\frac{7}{10}$ | $\frac{1}{8}$ | $\frac{2}{6}$ |

2. Indique la fraction correspondant à la partie grisée.

| | | | | | |
|---|---------------|---|-------------------------------------|---|---------------|
|  | $\frac{3}{4}$ |  | $\frac{1}{3}$ |  | $\frac{1}{2}$ |
| <hr/> | | <hr/> | $\frac{1}{3}$ | <hr/> | |