

① Ecris ces fractions en lettres.

a) $\frac{1}{5}$ b) $\frac{7}{2}$ c) $\frac{4}{6}$ d) $\frac{3}{4}$ e) $\frac{6}{8}$ f) $\frac{9}{3}$ g) $\frac{5}{12}$ h) $\frac{8}{7}$ i) $\frac{20}{100}$

un cinquième

trois quarts

cing douzièmes

sept denis

six huitièmes

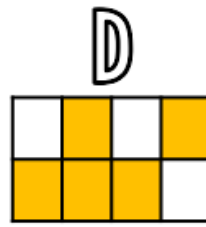
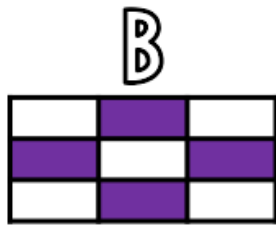
huit septièmes

quatre sixièmes

neuf tiers

vingt centièmes

② Ecris les fractions représentées par les parties coloriées.



$\frac{1}{4}$

$\frac{4}{9}$

$\frac{2}{6}$

$\frac{5}{8}$

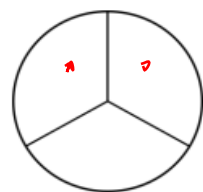
$\frac{3}{5}$




Ecris
la fraction B **en lettres!**

③ Colorie pour obtenir la fraction demandée.

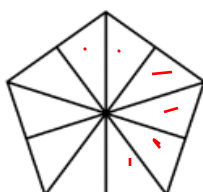
quatre neuvièmes



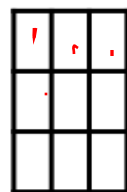
$\frac{2}{3}$




$\frac{3}{5}$



$\frac{6}{10}$



$\frac{4}{9}$



$\frac{7}{8}$