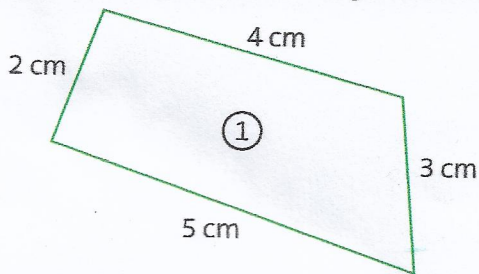
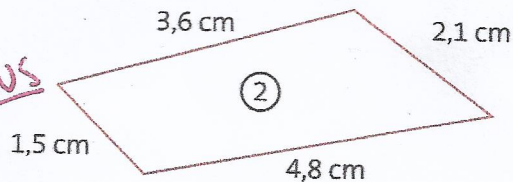


Mesurer des périmètres

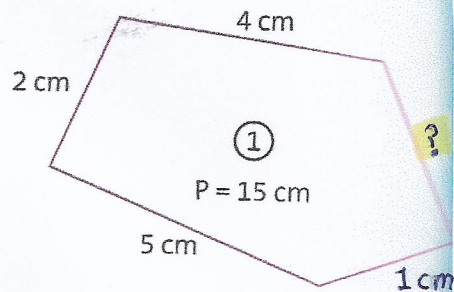
1/ * Trouve le périmètre de ces quadrilatères.



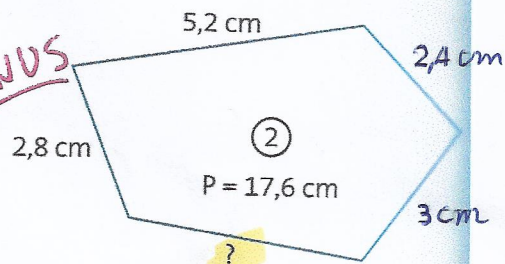
BONUS



2/ * Trouve la mesure manquante pour figure.



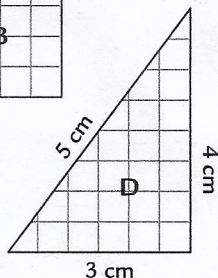
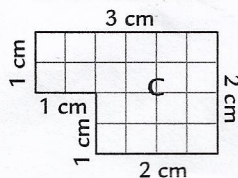
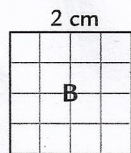
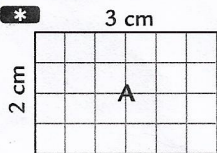
BONUS



Calculer le périmètre d'un polygone

3/ Calcule le périmètre de chaque polygone. Donne ton résultat en cm, puis en mm.

a. *



b. ***

