

Le mentaire









Date

Prénom

Exercice n° 1

Ecris l'heure sous chaque horloge.



[]

[]

[]

[]

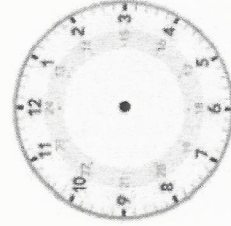

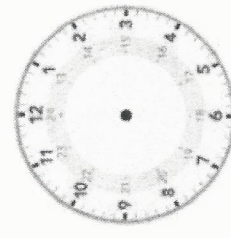
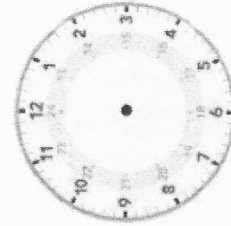
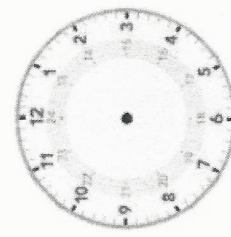

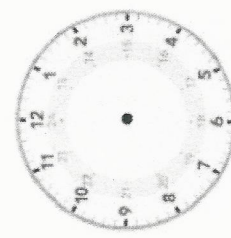
[]

[]

[]

Exercice n° 2

Dessine les aiguilles.



7 h 00 min

3 h 30 min


11 h 00 min

5 h 45 min

10 h 20 min

6 h 30 min

8 h 15 min




Date _____

Prénom _____




Exercice n° 1


Ecris l'heure sous chaque horloge.




2 h / 14 h




9 h 30 / 21 h 30




8 h 20 / 20 h 20




5 h / 17 h



3 h 45 / 15 h 45



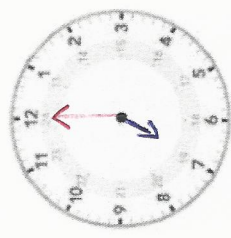
12 h 30 / 00 h 30




6 h 05 / 18 h 05

Exercice n° 2

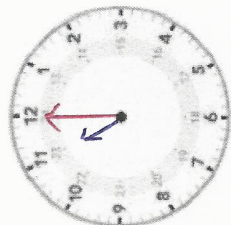
Dessine les aiguilles.



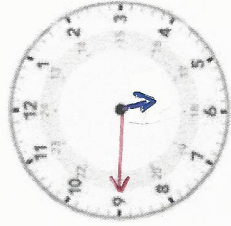
7 h 00 min



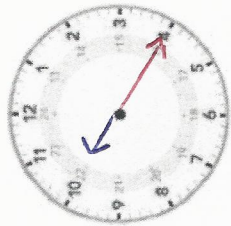
3 h 30 min




11 h 00 min




5 h 45 min



10 h 20 min



6 h 30 min



8 h 15 min