
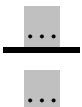
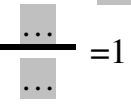
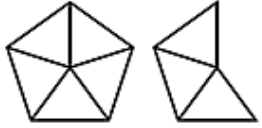

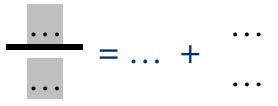

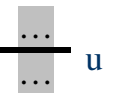
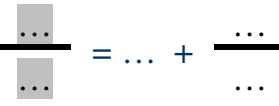


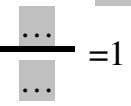

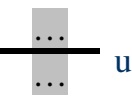
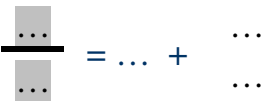
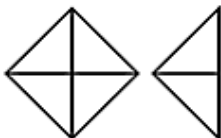
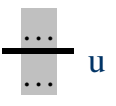
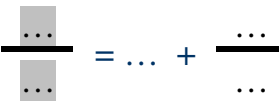

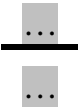
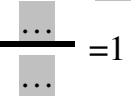
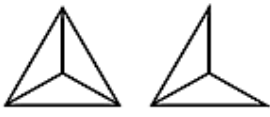
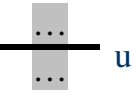
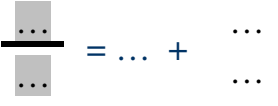
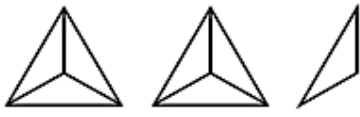
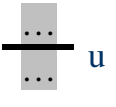
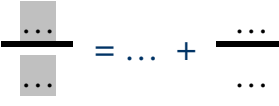


| | | |
|--|---|--|
|  Unité   |    |    |
|  Unité   |    |    |
|  Unité   |    |    |

➡ Observe les dessins et complète par <, > ou =

$$\frac{8}{5} \dots 1$$

$$\frac{3}{3} \dots 1$$

$$\frac{6}{4} \dots 1$$

$$\frac{14}{5} \dots 1$$

$$\frac{4}{4} \dots 1$$

| | | |
|--|---|---|
| Unité $\frac{\dots}{\dots} = 1$ | $\frac{\dots}{\dots} = \dots + \frac{\dots}{\dots}$ | $\frac{\dots}{\dots} = \dots + \frac{\dots}{\dots}$ |
|--|---|---|

| | | |
|--|---|---|
| Unité $\frac{\dots}{\dots} = 1$ | $\frac{\dots}{\dots} = \dots + \frac{\dots}{\dots}$ | $\frac{\dots}{\dots} = \dots + \frac{\dots}{\dots}$ |
|--|---|---|

| | | |
|--|---|---|
| Unité $\frac{\dots}{\dots} = 1$ | $\frac{\dots}{\dots} = \dots + \frac{\dots}{\dots}$ | $\frac{\dots}{\dots} = \dots + \frac{\dots}{\dots}$ |
|--|---|---|

➡ Observe les dessins et complète par <, > ou =

$\frac{9}{6} \dots 1$
 $\frac{8}{3} \dots 1$
 $\frac{3}{4} \dots 1$
 $\frac{10}{4} \dots 1$
 $\frac{3}{3} \dots 1$

➡ Certaines fractions sont égales à un nombre entier : écris-les :

$\frac{\dots}{3} = 1$
 $\frac{\dots}{3} = 2$
 $\frac{\dots}{4} = 1$
 $\frac{\dots}{6} \dots 1$