


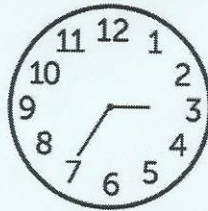
# Mesures CM1 : calculer des durées

1 Dans combien de temps sera-t-il... ?




une heure ?

45 min



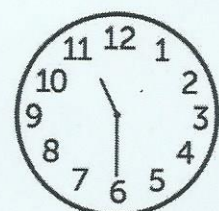
trois heures ?

25 min



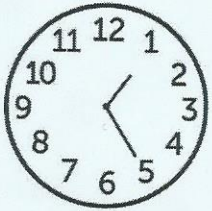
cinq heures ?

15 min



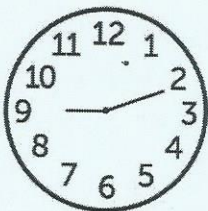
midi ?

30 min



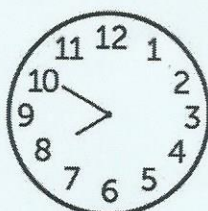
2 heures ?

35 min



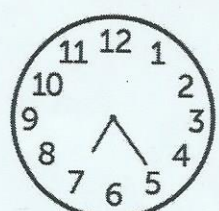
10 heures ?

50 min



8 heures ?


10 min



8 heures ?

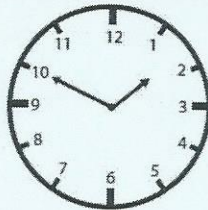
35 min

2 Combien de minutes depuis... ?



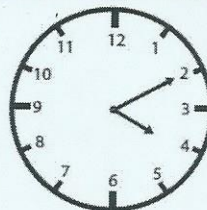
10 heures ?

30 min



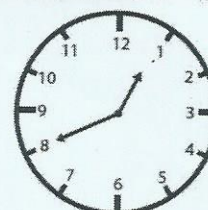
13 heures ?

50 min




16 heures ?

10 min



minuit ?

40 min



onze heures ?

15 min



sept heures ?

15 min



quatre heures ?

45 min