

Prénom :

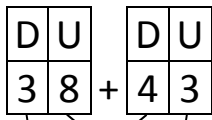
Date :

LES ARBRES DE CALCULS (2)

1- Complète les arbres.



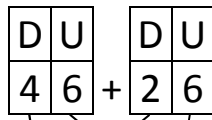
$38 + 43 = \dots$



..... +

.....

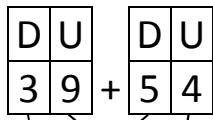
$46 + 26 = \dots$



..... +

.....

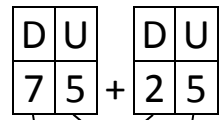
$39 + 54 = \dots$



..... +

.....

$75 + 25 = \dots$



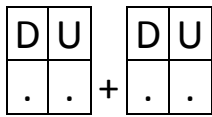
..... +

.....

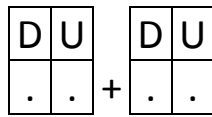
2- Dessine les arbres.



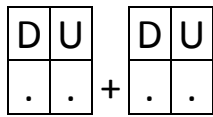
$65 + 17 = \dots$



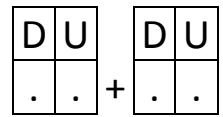
$38 + 38 = \dots$



$92 + 23 = \dots$



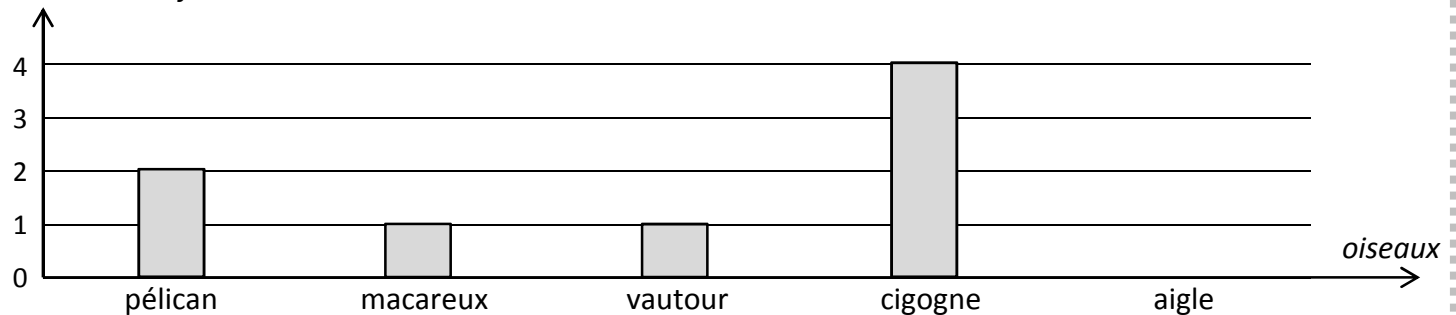
$59 + 55 = \dots$



RÉVISIONS Observe le graphique et réponds aux questions.

Voici le nombre d'œufs pondus par des oiseaux à chaque couvée.

nombre d'œufs



Combien d'œufs pond la cigogne ?.....

Quel oiseau pond autant d'œufs que le vautour ?

.....

L'aigle pond deux œufs. **Complète** le graphique.