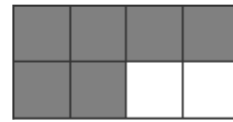
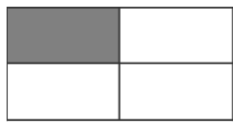
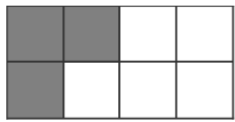


# Num2 LES FRACTIONS



1 ECRIS LES FRACTIONS CORRESPONDANTES A LA PARTIE COLOREE.

/8



.....  
.....

.....  
.....

.....  
.....

.....  
.....

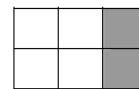
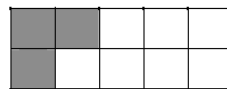
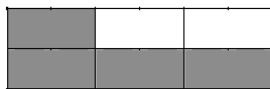
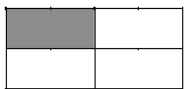


.....  
.....

.....  
.....

.....  
.....

.....  
.....



.....  
.....

.....  
.....


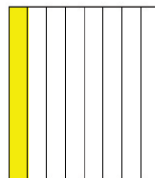



.....  
.....

.....  
.....

.....  
.....

1 Ecris les fractions correspondantes à la partie colorée

/2,5 pts



.....

.....

.....

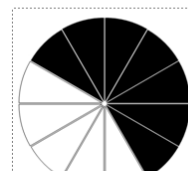
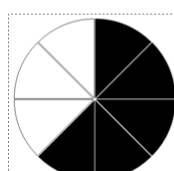
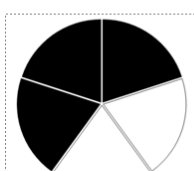
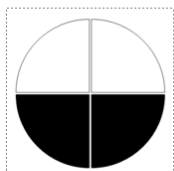
.....

.....

3. À côté de chaque fraction, indique la fraction correspondante à la partie grisée.



2) Ecris la fraction correspondant à la partie coloriée:

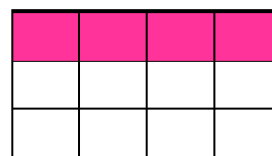
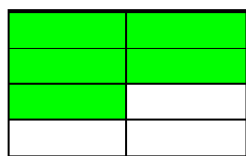
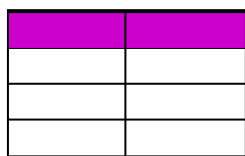


\_\_\_\_\_ ou \_\_\_\_\_

\_\_\_\_\_

\_\_\_\_\_

\_\_\_\_\_

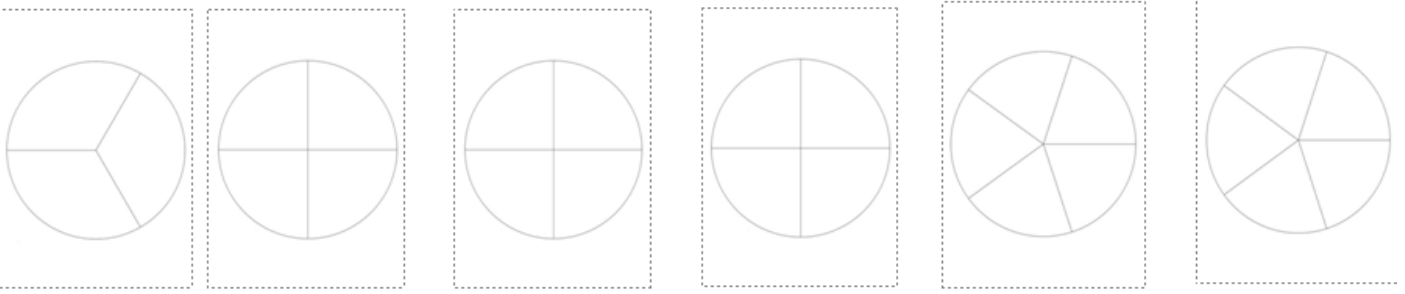


\_\_\_\_\_ ou \_\_\_\_\_

\_\_\_\_\_

\_\_\_\_\_ ou \_\_\_\_\_

**1) Colorie la partie correspondant à la fraction:**



$$\frac{2}{3}$$

$$\frac{3}{4}$$

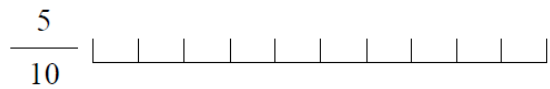
$$\frac{1}{2}$$

$$\frac{2}{4}$$

$$\frac{3}{5}$$

$$\frac{5}{5}$$

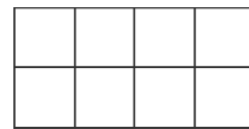
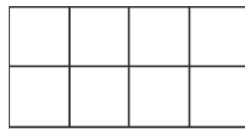
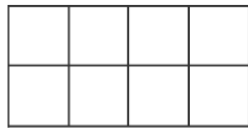
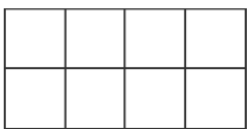
2. Sur chacun des segments unités suivants, colorie la partie correspondante à la fraction indiquée:



**BONUS**

**2** A TOI DE COLORIER LES FRACTIONS CORRESPONDANTES.

/8



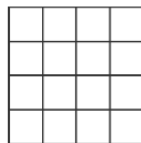
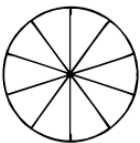


$$\frac{1}{8}$$

$$\frac{1}{2}$$

$$\frac{3}{4}$$

$$\frac{7}{8}$$





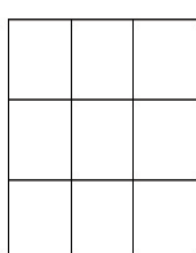
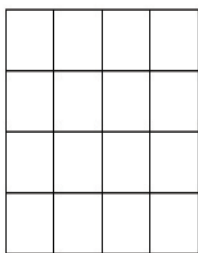
$$\frac{3}{10}$$

$$\frac{2}{8}$$

$$\frac{3}{10}$$

$$\frac{8}{100}$$

**2** Sers-toi des quadrillages pour représenter les fractions proposées



$$\frac{1}{2}$$

$$\frac{2}{3}$$

$$\frac{3}{4}$$

$$\frac{7}{8}$$

$$\frac{2}{6}$$