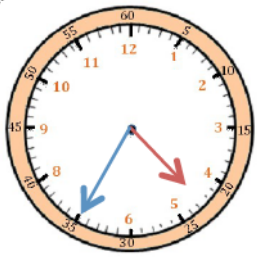
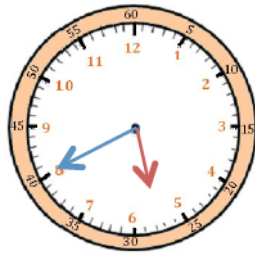


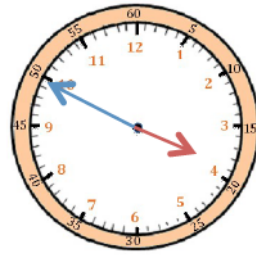
**Écris les heures indiquées sur les horloges. Sur la 1<sup>ère</sup> ligne, nous sommes le matin. Sur la 2<sup>ème</sup> ligne, nous sommes l'après-midi.**



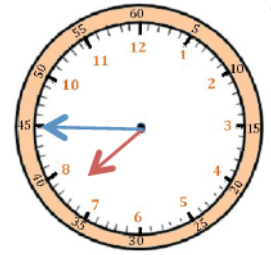
Il est 4 h 35 min ou  
5 h moins vingt-cinq



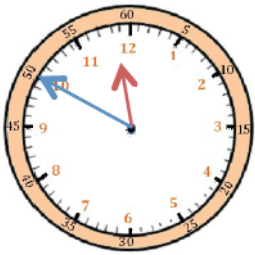
Il est \_\_\_ h \_\_\_ min  
ou \_\_\_\_\_



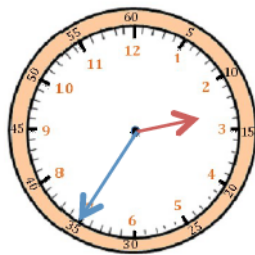
Il est \_\_\_ h \_\_\_ min  
ou \_\_\_\_\_



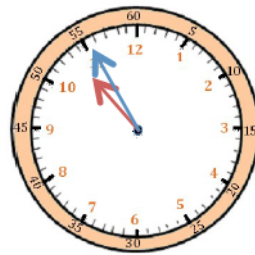
Il est \_\_\_ h \_\_\_ min  
ou \_\_\_\_\_



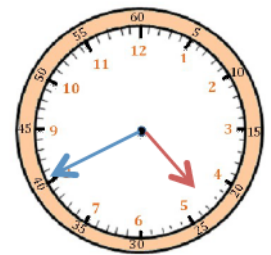
Il est \_\_\_ h \_\_\_ min  
ou \_\_\_\_\_



Il est \_\_\_ h \_\_\_ min  
ou \_\_\_\_\_

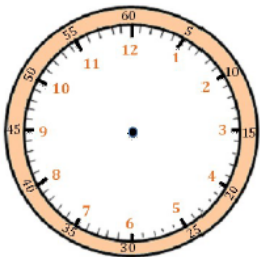


Il est \_\_\_ h \_\_\_ min  
ou \_\_\_\_\_

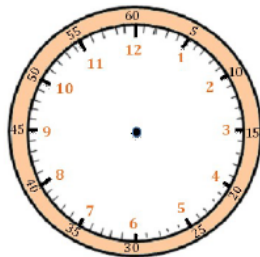


Il est \_\_\_ h \_\_\_ min  
ou \_\_\_\_\_

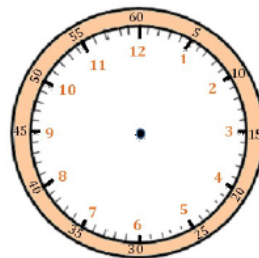
**Place les aiguilles selon l'heure indiquée (en rouge les heures, en bleu les minutes).**



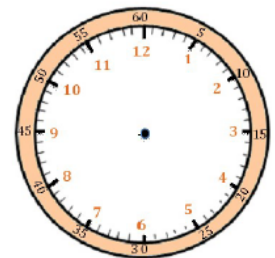
Il est 12 h 40 min.



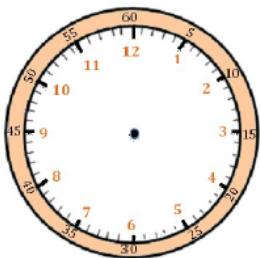
Il est 9 h moins vingt-cinq.



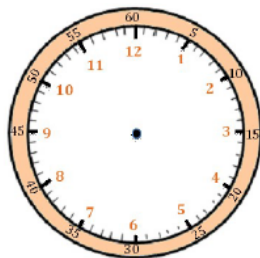
Il est 15 h 55 min.



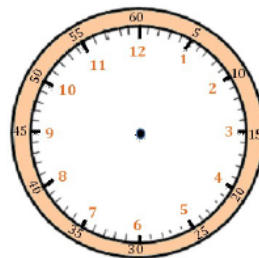
Il est 1 h moins le quart.



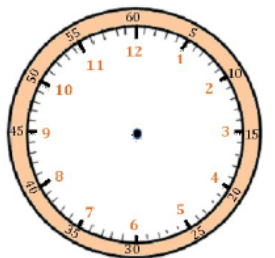
Il est 6 h moins dix.



Il est 21 h 35 min.



Il est midi moins cinq.



Il est 17 h 40 min.