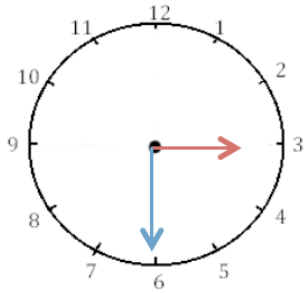
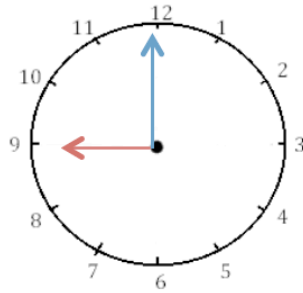


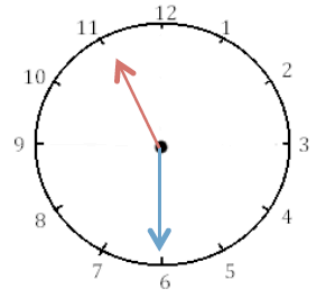
Ecris les heures indiquées sur les horloges. Nous sommes le matin.



..... h min

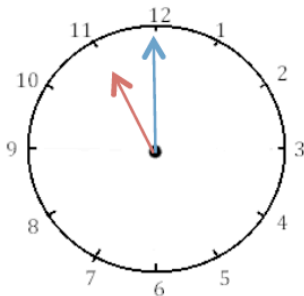


..... h min

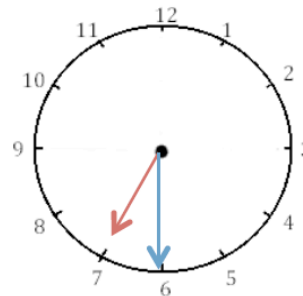


..... h min

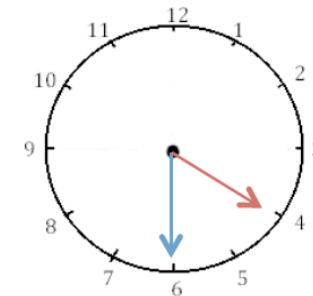
Ecris les heures indiquées sur les horloges. Nous sommes l'après-midi.



..... h min

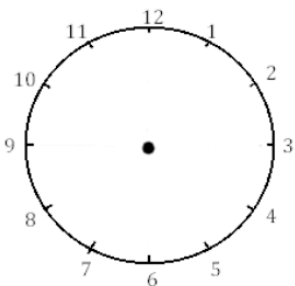


..... h min

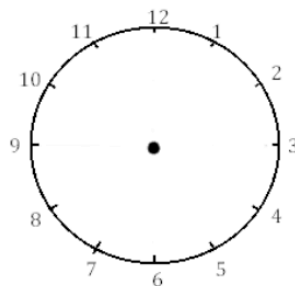


..... h min

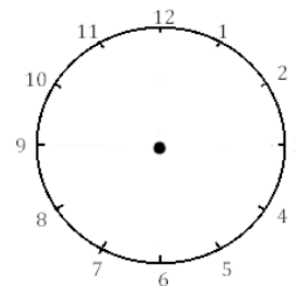
Place les aiguilles selon l'heure indiquée (en rouge les heures, en bleu les minutes).



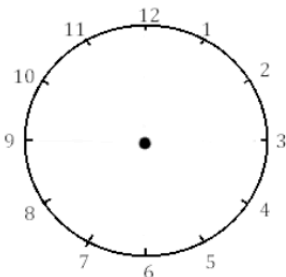
Il est 3 h 00 min.



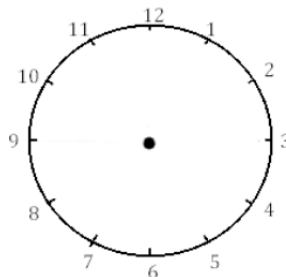
Il est 11 h 00 min.



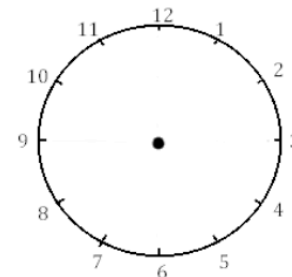
Il est 5 h 00 min.



Il est 23 h 00 min.



Il est 14 h 00 min.



Il est 18 h 00