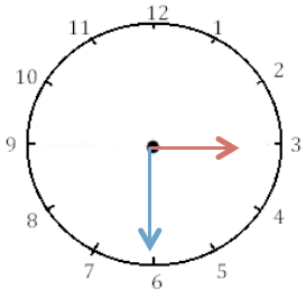
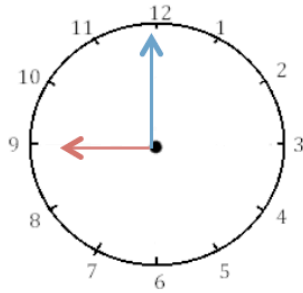


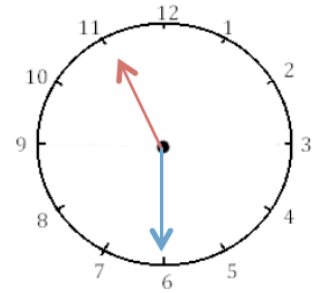
Ecris les heures indiquées sur les horloges. Nous sommes le matin.



3 h 30 min

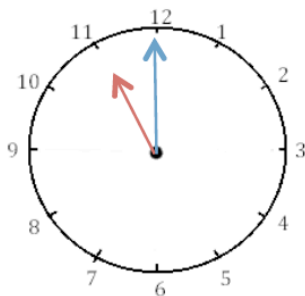


9 h 00 min

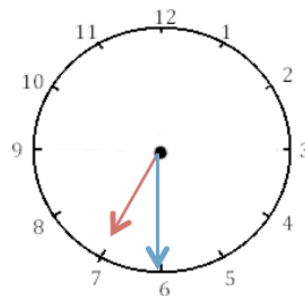


11 h 30 min

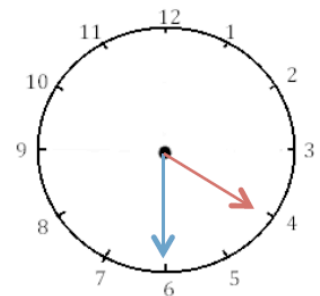
Ecris les heures indiquées sur les horloges. Nous sommes l'après-midi.



23 h 00 min

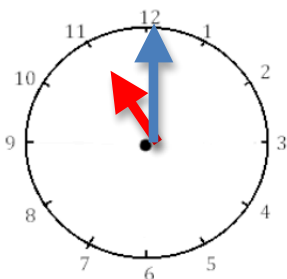


19 h 30 min

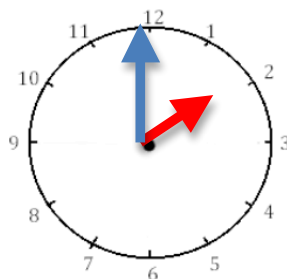


16 h 30 min

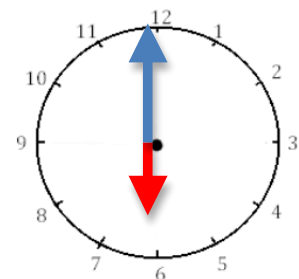
Place les aiguilles selon l'heure indiquée (en rouge les heures, en bleu les minutes).



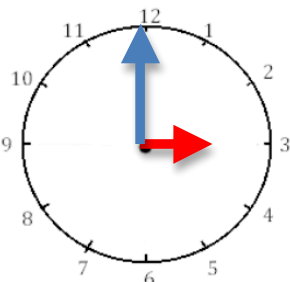
Il est 23 h 00 min.



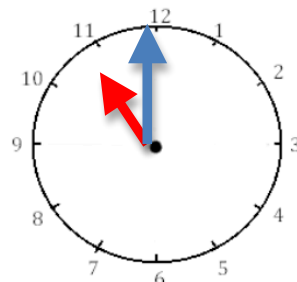
Il est 14 h 00 min.



Il est 18 h 00



Il est 3 h 00 min.



Il est 11 h 00 min.



Il est 5 h 00 min.