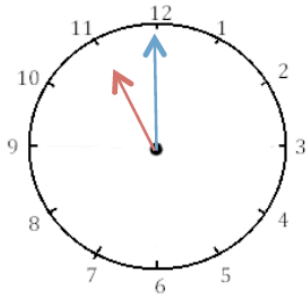
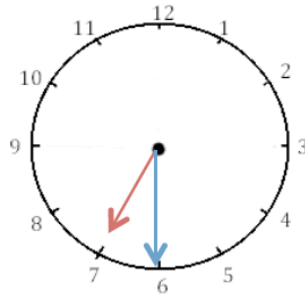


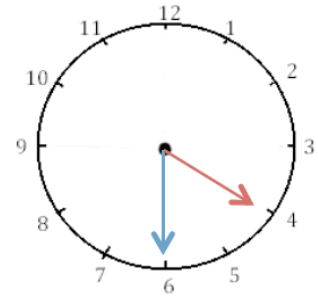
**Ecris les heures indiquées sur les horloges. Nous sommes le matin.**



11 h 00 min

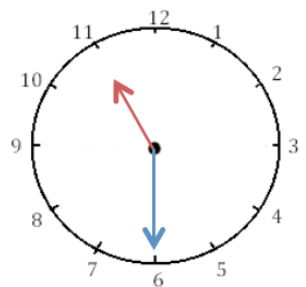


7 h 30 min

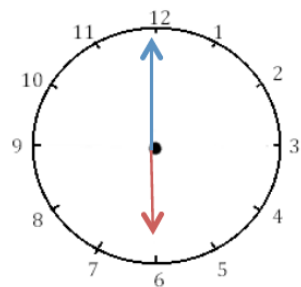


4 h 30 min

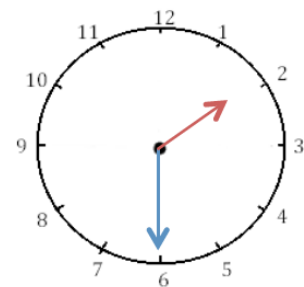
**Ecris les heures indiquées sur les horloges. Nous sommes l'après-midi.**



23 h 30 min

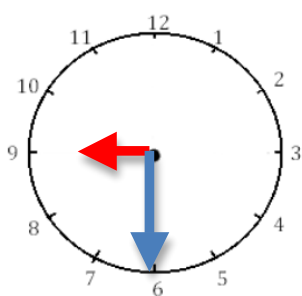


18 h 00 min

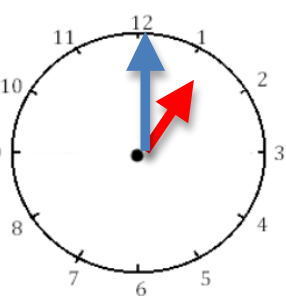


14 h 30 min

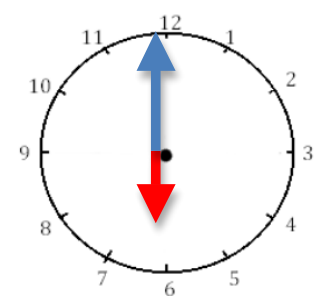
**Place les aiguilles selon l'heure indiquée (en rouge les heures, en bleu les minutes).**



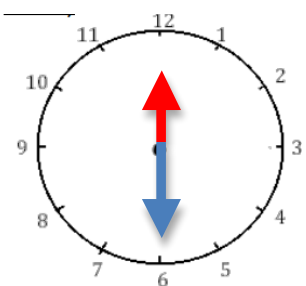
Il est 21 h 30 min.



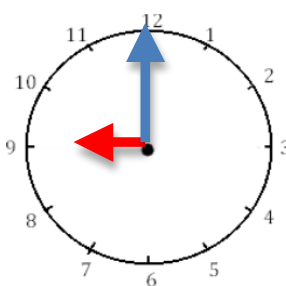
Il est 13 h 00 min.



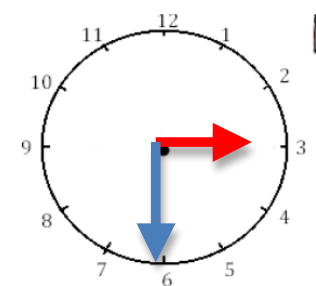
Il est 18 h 30 min.



Il est 12 h 30 min.



Il est 9 h 00 min.



Il est 15 h 30 min.