

# LES FRACTIONS

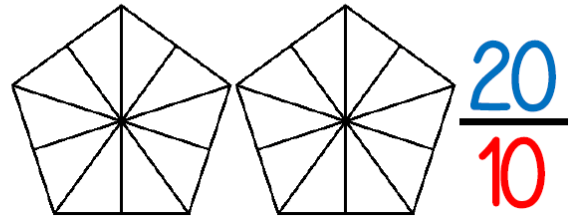
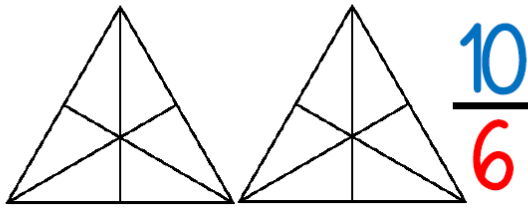
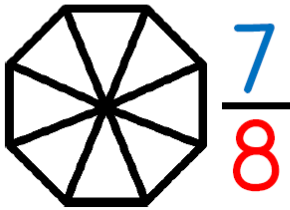
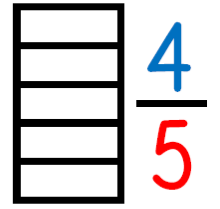
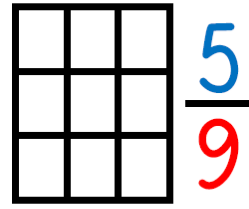
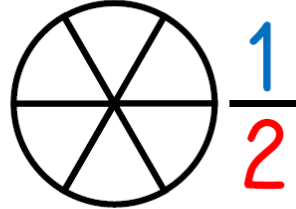
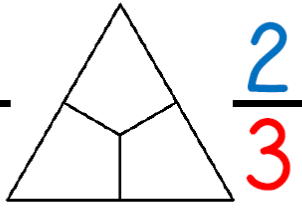
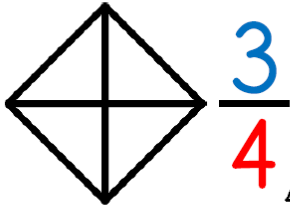


Exercice n° 4



Colorie pour obtenir la fraction demandée.

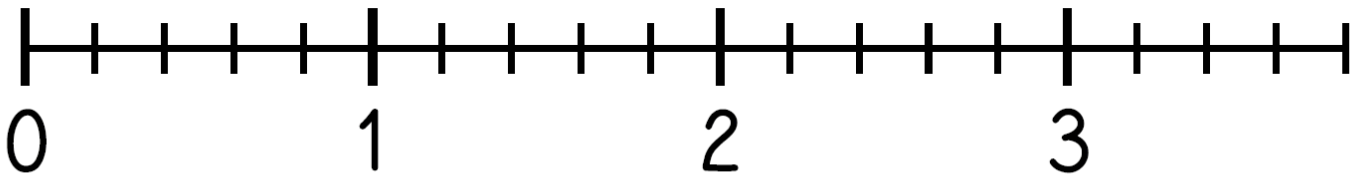
Saisir votre texte



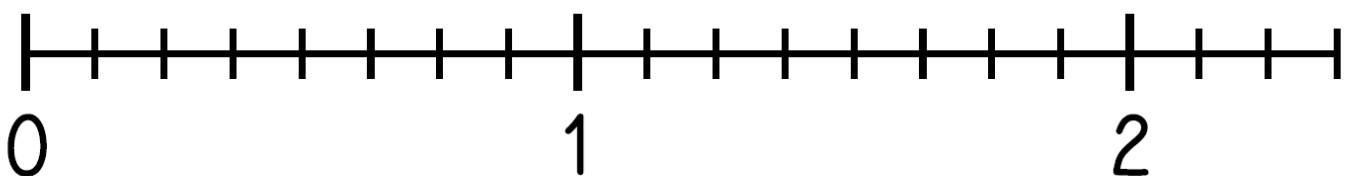
Exercice n° 3

Place les fractions sur la droite graduée.

$$\frac{3}{5} \quad \frac{9}{5} \quad \frac{5}{5} \quad \frac{12}{5} \quad \frac{18}{5}$$



$$\frac{2}{8} \quad \frac{6}{8} \quad \frac{14}{8} \quad 1 + \frac{3}{8} \quad 2 + \frac{1}{8}$$



placer ces deux fractions deux quarts et six quarts