



Calcul

Fiche 6

Les multiplications sans retenue

1 Calcule ces multiplications en colonne:

$$\begin{array}{r} 801 \\ \times 5 \\ \hline \end{array}$$

$$\begin{array}{r} 934 \\ \times 2 \\ \hline \end{array}$$

$$\begin{array}{r} 713 \\ \times 3 \\ \hline \end{array}$$

$$\begin{array}{r} 921 \\ \times 2 \\ \hline \end{array}$$

$$\begin{array}{r} 802 \\ \times 4 \\ \hline \end{array}$$



2 Calcule ces multiplications en colonne:

$$804 \times 2$$

$$501 \times 3$$

$$621 \times 4$$

$$901 \times 5$$





3 Calcule ces multiplications en colonne:

$$732 \times 2$$

$$510 \times 4$$

$$912 \times 4$$

$$711 \times 5$$





Calcul

Fiche 7

Les opérations : + ; - ; x

1 Calcule ces multiplications en colonne:

121×2

822×3

301×4

61×5

| | | |
|--|--|--|
| | | |
| | | |
| | | |
| | | |
| | | |
| | | |

| | | |
|--|--|--|
| | | |
| | | |
| | | |
| | | |
| | | |
| | | |

| | | |
|--|--|--|
| | | |
| | | |
| | | |
| | | |
| | | |
| | | |

| | | |
|--|--|--|
| | | |
| | | |
| | | |
| | | |
| | | |
| | | |

2 Calcule ces soustractions en colonne:

$324 - 201$

$250 - 108$

$728 - 646$

$894 - 105$

| | | |
|--|--|--|
| | | |
| | | |
| | | |
| | | |
| | | |
| | | |

| | | |
|--|--|--|
| | | |
| | | |
| | | |
| | | |
| | | |
| | | |

| | | |
|--|--|--|
| | | |
| | | |
| | | |
| | | |
| | | |
| | | |

| | | |
|--|--|--|
| | | |
| | | |
| | | |
| | | |
| | | |
| | | |

3 Calcule ces additions en colonne:

$245 + 125$

$348 + 205$

$497 + 271$

$226 + 226$

| | | |
|--|--|--|
| | | |
| | | |
| | | |
| | | |
| | | |
| | | |

| | | |
|--|--|--|
| | | |
| | | |
| | | |
| | | |
| | | |
| | | |

| | | |
|--|--|--|
| | | |
| | | |
| | | |
| | | |
| | | |
| | | |

| | | |
|--|--|--|
| | | |
| | | |
| | | |
| | | |
| | | |
| | | |



Calcul

Fiche 8

Les opérations : + ; - ; x

1 Calcule ces multiplications en colonne:

941×2

| | | |
|--|--|--|
| | | |
| | | |
| | | |
| | | |
| | | |
| | | |

602×3

| | | |
|--|--|--|
| | | |
| | | |
| | | |
| | | |
| | | |
| | | |

821×4

| | | |
|--|--|--|
| | | |
| | | |
| | | |
| | | |
| | | |
| | | |

910×5

| | | |
|--|--|--|
| | | |
| | | |
| | | |
| | | |
| | | |
| | | |

2 Calcule ces soustractions en colonne:

$817 - 351$

| | | |
|--|--|--|
| | | |
| | | |
| | | |
| | | |
| | | |
| | | |

$756 - 328$

| | | |
|--|--|--|
| | | |
| | | |
| | | |
| | | |
| | | |
| | | |

$239 - 16$

| | | |
|--|--|--|
| | | |
| | | |
| | | |
| | | |
| | | |
| | | |

$999 - 109$

| | | |
|--|--|--|
| | | |
| | | |
| | | |
| | | |
| | | |
| | | |

3 Calcule ces additions en colonne:

$205 + 297$

| | | |
|--|--|--|
| | | |
| | | |
| | | |
| | | |
| | | |
| | | |

$834 + 624$

| | | |
|--|--|--|
| | | |
| | | |
| | | |
| | | |
| | | |
| | | |

$831 + 279$

| | | |
|--|--|--|
| | | |
| | | |
| | | |
| | | |
| | | |
| | | |

$476 + 236$

| | | |
|--|--|--|
| | | |
| | | |
| | | |
| | | |
| | | |
| | | |