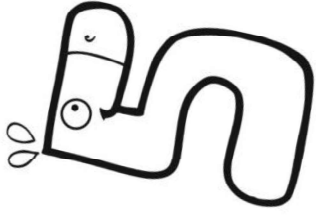


Temps



Date

Prénom

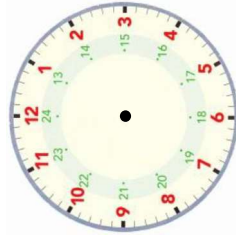
Exercice n° 1

Ecris l'heure sous chaque horloge.

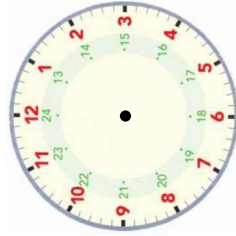


Exercice n° 2

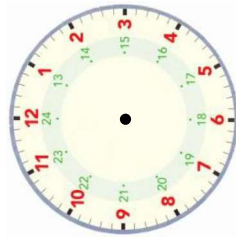
Dessine les aiguilles.



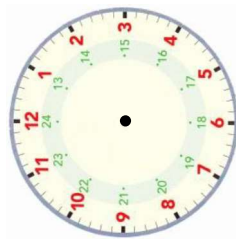
20 h 00 min



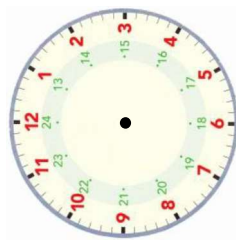
3 h 45 min



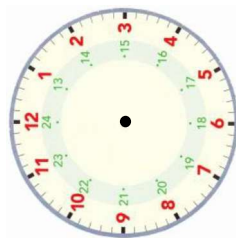
14 h 20 min



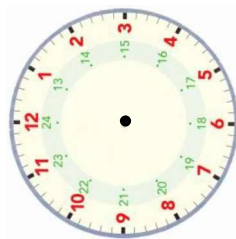
17 h 30 min



6 h 50 min



9 h 35 min



13 h 15 min