



Complète.

3



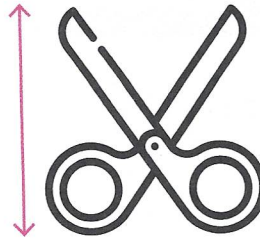
la longueur du stylo
14 cm

1 dm 4 cm




la longueur de la trousse
23 cm

..... dm cm



la longueur des ciseaux
12 cm

..... dm cm



la hauteur de la table
74 cm

..... dm cm



Transforme.

4

54 cm = 5 dm 4 cm



6 dm 9 cm = 69 cm



23 cm = dm cm

4 dm 3 cm = cm

97 cm = dm cm

5 dm = cm

108 cm = dm cm

10 dm = cm

124 cm = dm cm

10 dm 4 cm = cm

Complète.

5



Le python royal mesure
125 cm

1 m 25 cm

1 m 2 dm 5 cm



La couleuvre mesure
213 cm

..... m cm

..... m dm cm



Le boa mesure
408 cm

..... m cm

..... m dm cm



Le mamba noir mesure
430 cm

..... m cm

..... m dm cm



Calcule.

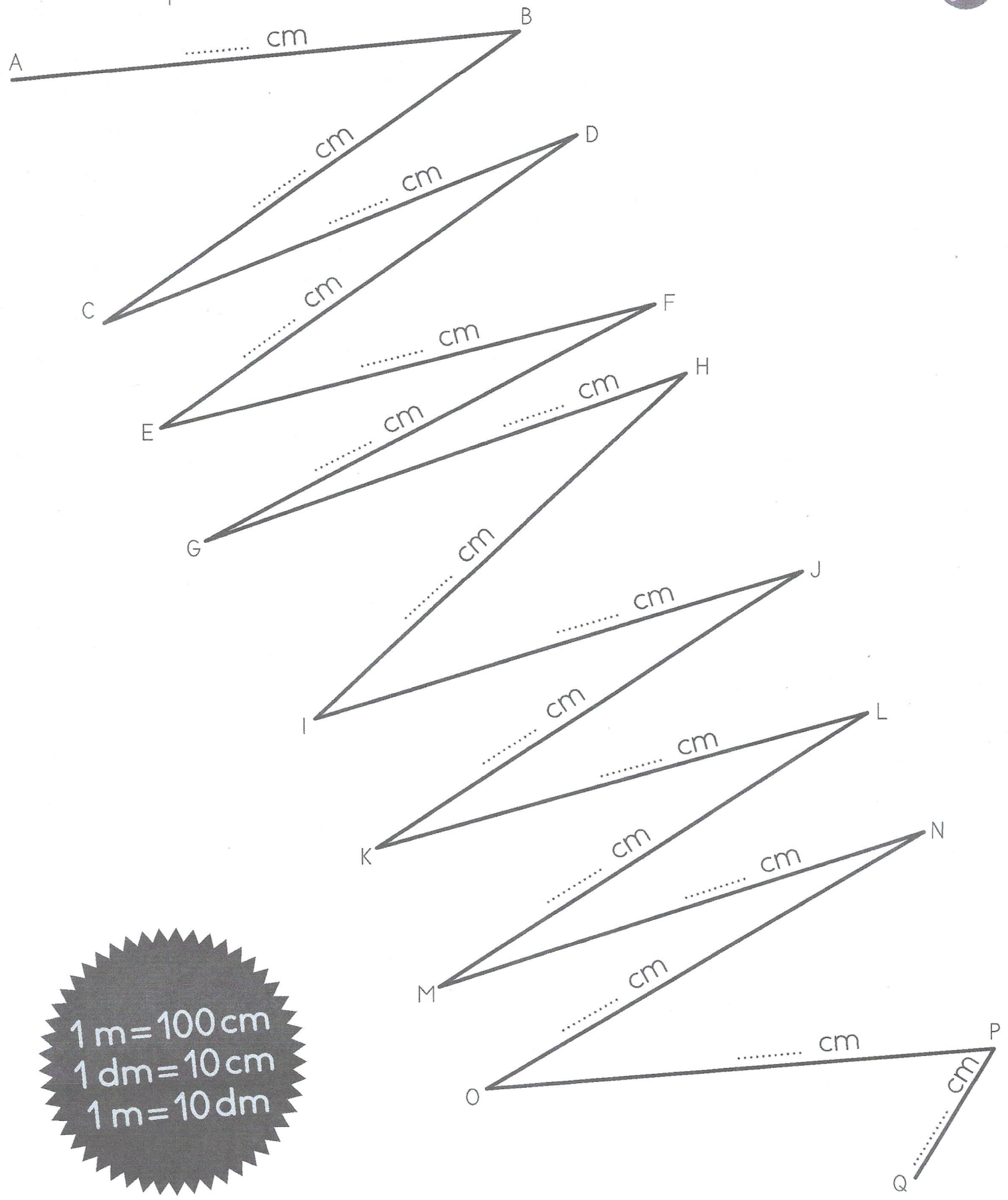
$$\begin{array}{r} 473 \\ 267 \\ + 154 \\ \hline \end{array}$$

$$\begin{array}{r} 36 \\ 124 \\ 345 \\ + 426 \\ \hline \end{array}$$

$$\begin{array}{r} 32 \\ 24 \\ 18 \\ + 46 \\ \hline \end{array}$$



Mesure et complète.



$1 \text{ m} = 100 \text{ cm}$
 $1 \text{ dm} = 10 \text{ cm}$
 $1 \text{ m} = 10 \text{ dm}$

Longueur de la ligne brisée qui relie A à Q.

..... cm ou m cm ou dm cm ou m dm cm