




Géométrie

Fiche 4

Les solides : le pave

1

Je compte le nombre de sommets, de faces. Je complète la définition.



Nombres de faces : _____

Nombre de sommets : _____



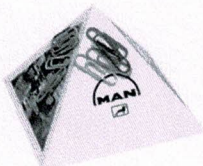

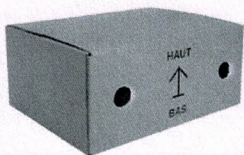
Nombre d'arêtes : _____

Un pavé a _____ faces, _____ sommets et _____ arêtes.

Toutes ses faces sont des _____ ou des _____.

2

J'entoure tous les pavés.




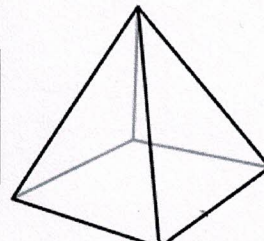

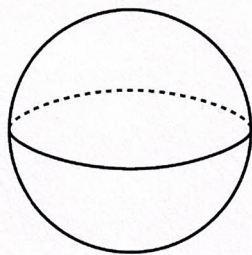


Géométrie

Les solides

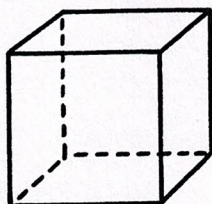
1

Je barre les solides qui ne roulent pas.




2

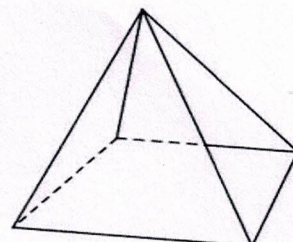
Je compte le nombre de faces de chaque solide.



_____ faces



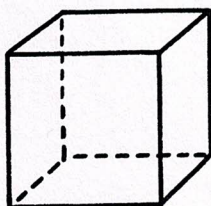
_____ faces




_____ faces

3

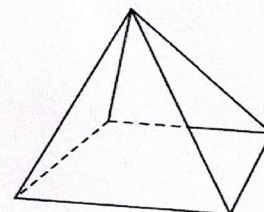
Je marque les sommets en bleu et je compte leur nombre pour chaque solide.



_____ sommets



_____ sommets



_____ sommets

