


1 * Détermine l'aire de chaque surface avec l'unité indiquée.


u




u



u



u



4 * Compare les couples de figures par couleur. Indique, pour chaque couple, laquelle a la plus grande aire.

u

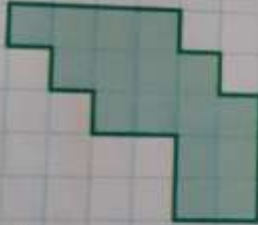
A



B



C



D



E



F

