


Prénom : _____


Date : _____

☞ Lire les heures pleines et avec demi-heures.


① Écris l'heure en dessous de chaque horloge.




_____ h _____




_____ h _____




_____ h _____




_____ h _____



_____ h _____



_____ h _____



_____ h _____



_____ h _____



_____ h _____