

figure 1 : carré

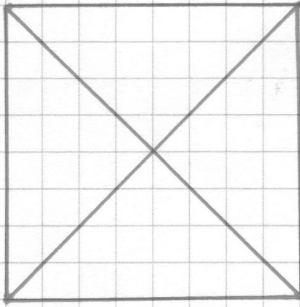


figure 2 : rectangle

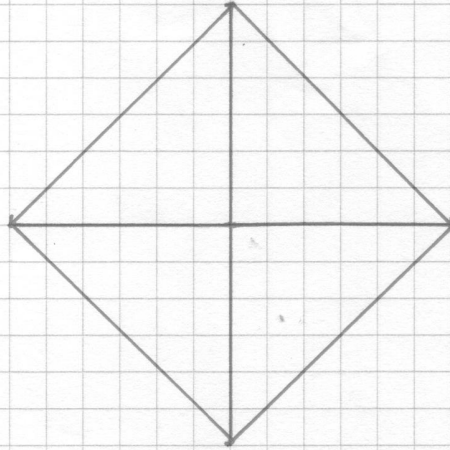
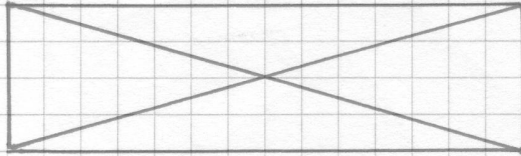


figure 3 : ?

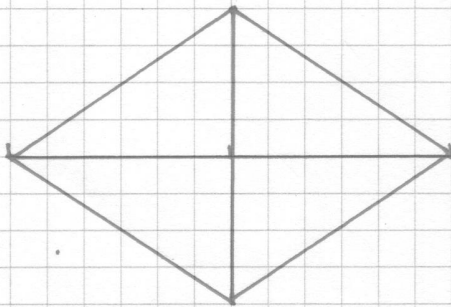


figure 4 : losange

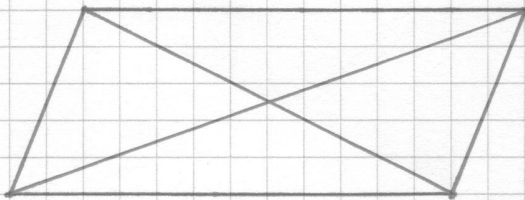


figure 5 : parallélogramme

- Observe les côtés :
- longueur ?
 - parallèles ?
 - perpendiculaires ?

Même chose pour les diagonales .

Observe en plus où elles se coupent .